



SHREE VASISHTHA VIDHYALAYA.

SST Worksheet 2024-25



Name : - _____

Std.: - V- _____

Roll No. :- _____

Worksheet No: PA-02- 02



Date: - _____

Ch: 12 The Coastal Plains of India

Q- 1) Define.

- 1) Coastal plain: _____
- 2) Delta: _____
- 3) Backwater: _____
- 4) Port: _____
- 5) Cargo: _____
- 6) Tribals: _____

Q-2) Pictures talk.

<p>1) </p>	<p>2)- </p>
<p>1) Name the picture: _____</p> <p>2) Where is it located? _____</p>	<p>1) Name the picture: _____</p> <p>2) Where is it located? _____</p>

Q-3) Name the following.

- 1) Venice of the East in India. _____
- 2) The place where Western and Eastern coastal plains meet. _____
- 3) A small body of salt water. _____
- 4) The second largest lagoon in the world. _____
- 5) The smallest union territory of India. _____
- 6) The term used for a group of islands. _____

Q-5) Choose the correct options and fill in the blanks.

- 1) The Eastern coastal plain lies between Eastern Ghats and _____.
a) the Arabian sea b) the Bay of Bengal c) the Indian ocean
- 2) _____ is the Northern part of Western coastal plain.
a) Gujarat coast b) Konkan coast c) Malabar coast
- 3) _____ coastal plain is the Rice Bowl of India.
a) Southern b) Western c) Eastern

4) The port of _____ is the largest port of India by size and shipping traffic.

a) Mumbai

b) Kandala

c) Cochin

5) _____ is the most important harbour on the Coromandel coast.

a) Kanniyakumari

b) Chennai

c) Paradip

6) The main occupation of people in coastal plain is _____.

a) fishing & farming

b) mining & tourism

c) both

Q-4) Match the following.

(A)

1) The nearest mainland to the Andaman and Nicobar islands.

2) The coast renowned for spices

3) The southern part of Eastern coastal plain

4) The world's largest lagoon

5) An artificial harbour

(B)

a) Coromandel coast

b) New Caledonia Barrier Reef

c) Paradip

d) Myanmar

e) Malabar

Ans:-

1-_____

2-_____

3-_____

4-_____

5-_____

Q-6) Classify the following.




1) [36 islands, 572 islands, Port Blair, Kavaratti]

<u>Andaman and Nicobar</u>	<u>Lakshadweep</u>

2) [Northern Circars, Konkan coast, Karnataka coast, Coromandel coast]

<u>Western Coastal Plain</u>	<u>Eastern Coastal Plain</u>

Q-7) Identify the pictures.

1) 	2) 	3) 

Q-8) Give Reason.

1) The soil around the deltas of rivers are more fertile than the other soils.

2) Tourism helps to earn money but has negative environmental impacts on beaches and islands.
