



SHREE VASISHTHA VIDHYALAYA.

SST Worksheet 2024-25



Name : - _____

Std.: - V - _____

Roll No. :- _____

Worksheet No: PA-02- 01

Date: - _____

Ch.9. The Great Himalayas, Ch.11. The Deccan Plateau


Q- 1) Define.

- 1) Perennial :- _____
- 2) Pass :- _____
- 3) Deciduous :- _____
- 4) Alluvium :- _____
- 5) Shrine :- _____
- 6) Plateau :- _____
- 7) Mining :- _____

Q-2) Pictures talk.

A) 1) Name the Picture

2) Where is it located?



B) 1) Name the Picture.

2) Where is it located?



Q-3) Name the following.

- 1) Lowest Himalayan range. _____
- 2) Electricity produced by water. _____
- 3) Significant source of income in many parts of Himalayas. _____
- 4) Dam build on river Satluj. _____
- 5) Another name of great Himalayas. _____

Q-4) Give 2 examples.

- 1) Rivers that flow from west to east and fall into the Bay of Bengal.
1) _____ 2) _____
- 2) Rivers that flow from East to west & fall in to the Arabian sea.
1) _____ 2) _____
- 3) Concentration of ore deposits
1) _____ 2) _____

4) Fresh Water Rivers originating from Himalayas.

1) _____

2) _____

5) Hill stations found in Middle Himalayas.

1) _____

2) _____

6) States covered by the northern mountains.

1) _____

2) _____

Q-5) Give Reason.

1) The soil found in Deccan Plateau is black in colour. _____

2) Mountains are important to human life _____

Q-6) MCQ.

1) The nickname of Bengaluru is _____

a) Silicon Valley of India

b) Roof of India

c) Treasure land

2) _____ is the highest mountain peak of India.

a) K2

b) Mt. Everest

c) Kanchenjunga

3) _____ is the largest producer of silk & coffee in India.

a) Karnataka

b) Gujarat

c) Kerala

4) _____ is the largest producer of diamond in India.

a) Uttarakhand

b) Madhya Pradesh

c) Himachal Pradesh

5) _____ Valley is one of the best example of Duns.

a) Kullu

b) Kangra

c) Dehradun

Q-7) Classify.



1) [Greater Himalayas, Middle Himalayas, Mt. Everest, Pir Panjal]

<u>Himadri</u>	<u>Himachal</u>

2) [Jharkhand, Telangana, Crystalline rocks, Granite rocks]

<u>Deccan Plateau</u>	<u>Chhota Nagpur Plateau</u>

Q-8 Identify the pictures.

1) 	2) 	3) 	4) 