



SHREE VASISHTHA VIDHYALAYA

Maths Worksheet 2024-25

Name: _____

Std. I - _____

Roll No. _____

Worksheet No: - PA 01-01

Date: - _____

Q-1 Write numerals for the following number names.

- 1) Forty three _____
- 2) One hundred seventeen _____
- 3) One hundred fourteen _____
- 4) Two hundred eighty two _____
- 5) Three hundred sixty _____

Q-2 Write the missing numbers by counting forward.

a)

4	5	6	7					
---	---	---	---	--	--	--	--	--

b)

2	4	6	8					
---	---	---	---	--	--	--	--	--

Q-3 Write the position of the given letters.

- a) The position of **H** in ELEPHANT is
- b) The position of **A** in PEACOCK is
- c) The position of **Y** in MONKEY is
- d) The position of **G** in TIGER is

Q-4 Fill in the missing numbers.

- a) 120, 121, _____, _____, 124, _____, _____
- b) 261, 262, _____, _____, 265, _____, 267
- c) 381, _____, _____, _____, 385, _____
- d) 193, 194, _____, _____, 197, _____, 199

Q-5 Circle the largest number.

- a) 31, 342, 116
- b) 127, 216, 143
- c) 49, 42, 88
- d) 148, 323, 42

Q-6 Write the following in expanded form:

a) $32 = \boxed{} + \boxed{}$

d) $88 = \boxed{} + \boxed{}$

b) $61 = \boxed{} + \boxed{}$

e) $93 = \boxed{} + \boxed{}$

c) $18 = \boxed{} + \boxed{}$

Q-7 Write the correct tens and Ones for the given numbers.

a) $56 = \boxed{}$ tens and $\boxed{}$ ones

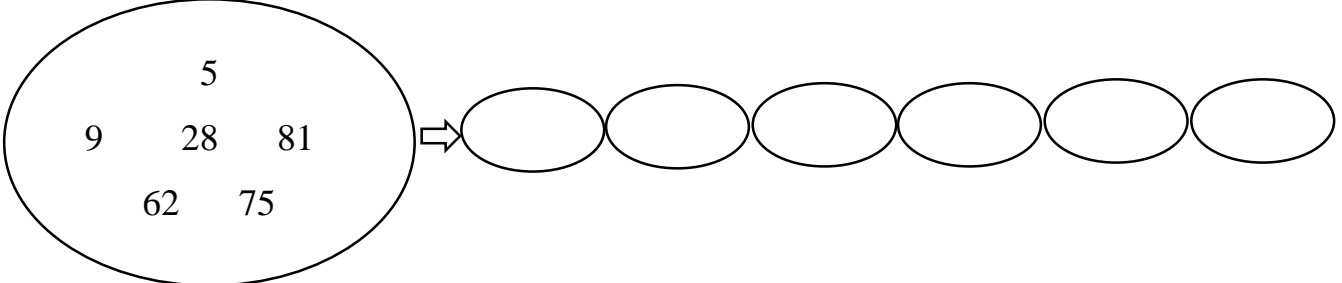
b) $24 = \boxed{}$ tens and $\boxed{}$ ones

c) $37 = \boxed{}$ tens and $\boxed{}$ ones

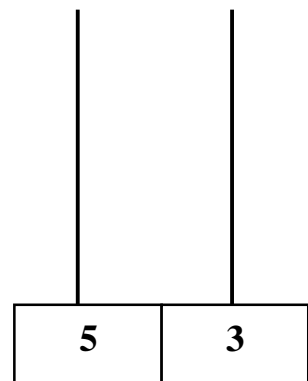
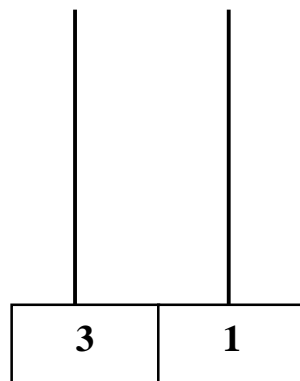
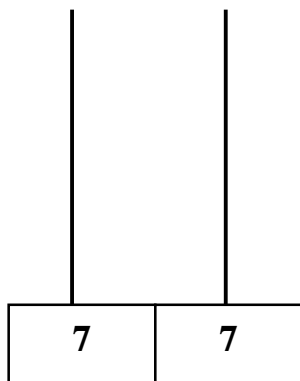
d) $44 = \boxed{}$ tens and $\boxed{}$ ones

e) $72 = \boxed{}$ tens and $\boxed{}$ ones

Q-8 Arrange the numbers from the greatest to smallest.

a) 

Q-9 Draw the beads on the abacus for the given number.



Q-10 Tables:

1) $0 \times 2 = \boxed{}$

5) $2 \times 4 = \boxed{}$

2) $\boxed{} \times 2 = 4$

6) $1 \times \boxed{} = 9$

3) $\boxed{} \times 6 = 0$

7) $\boxed{} \times 3 = 6$

4) $1 \times 7 = \boxed{}$

8) $0 \times 3 = \boxed{}$

