



SHREE VASISHTHA VIDHYALAYA

EVS Worksheet 2024-25

Name: _____

Std. I - _____

Roll No. _____

Worksheet No: - PA 01-01

Date: - _____

Conceptual understanding

Q-1 Tick the correct option

1) We can _____ food with our tongue.

a) see

b) taste

c) hear

1) 2. We have _____ sense organs.

a) six

b) five

c) two

2) 3. We feel with our _____.

a) skin

b) nose

c) leg

3) 4. Our _____ allows us to move our head from side to side.

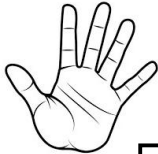
a) finger

b) toes

c) neck

Q-2 Cross (X) the body parts that does not belong to you.

1)



Hand

☐


2)



Paw

☐

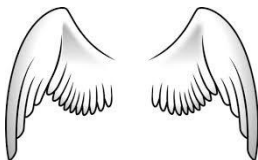
3)



Fin

☐

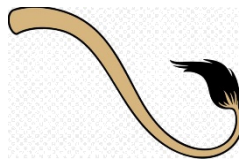
4)



Wing

☐

5)



Tail

☐

6)



Leg

☐

Q-3 Complete the information.

1) My name is _____.

2) I am _____ [boy / girl].

3) I am _____ years old.

4) My favourite colour is _____.

5) My favourite food is _____.

Q-4 Write the missing letter and complete the given spelling.

1) T ___ N ___ U ___

3) H ___ N ___

5) ___ Y ___ S

2) E ___ R

4) ___ O ___ E

6) ___ O ___ E

Scientific Skill

Q-1 Identify the part of the body and write its name from help box.


1)



2)



3)



4)



Q-2 Circle the names of the five body parts hidden in the grid:

N	E	C	K	D	H
P	T	E	N	S	A
F	N	P	E	K	N
O	N	P	E	K	D
O	M	L	P	S	P
T	O	N	G	U	E

Q-3 Draw as many candles on this cake as your age is.....

