



SHREE VASISHTHA VIDHYALAYA.



S. St. Worksheet 2024-25

Name: - _____

Std.:- IV - _____

Roll No. :- _____

Worksheet No: PA-2-01

Date: - _____

Ch.12 Art, Architecture and Culture, Ch. 13- Means of Transport

Q-1 Define the terms:

- 1) Heritage: _____

- 2) Miniature Paintings: _____

- 3) Commuters: _____

- 4) Inventions: _____

- 5) Integral: _____

Q-2: Who am I?

- 1) I am a famous folk dance of Rajasthan. _____
- 2) I am a famous musician who is associated with sarod _____
- 3) I am one of the largest dome in the world. _____
- 4) I am the fastest train in India with a top speed of 180 km/hr _____
- 5) I am India's biggest port _____

Q-3 Picture Talk

Look at the given picture and answer the following question

A] 1) What is the name of this vehicle?


2) In which city this system has already started?



B] 1) Name the picture.

2) What is it known for? _____

3) Where is it located ? _____



Q-4: Write full forms for the following.

- 1) HSR- _____
- 2) MMTS- _____
- 3) NH- _____

Q-5: Classify the words into different groups.

A] (Bharatnatyam, Garba, Odissi , Bhangra, Ghoomar, Kathakali)






Classical Dance	Folk Dance

B] (Cars, Tractor, Bullock Cart, Metro rails, Tonga, Buses,)

Urban Transport	Rural Transport

Q-6. Identify the following pictures:

(Late Pt. Ravi Shankar, Tabla, Sarod, Vande Bharat Express , Santoor, Khajuraho Temple,)

1) 	2) 	3) 
4) 	5) 	6) 