



Name : - _____



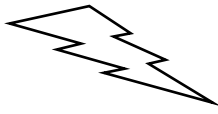

Std.:- IV - _____

Roll No. :- _____ Worksheet No.PA-2-02

Date : - _____

Ch.9 Time and calendar, Ch. 13 Symmetry

Q-1) Chose the correct answer.

- 1) 3 days 7 hours = ----- hours.
a. 67 b. 79 c. 149 d. 89
- 2) Twenty minutes to eight, the time is same as -----
a. 8:20 b. 7:20 c. 8:40 d. 7:40
- 3) 5 hours 30 minutes = ----- minutes.
a. 220 b. 420 c. 510 d. 330
- 4) Square has ----- lines of symmetry.
a. 4 b. 2 c. 1 d. many
- 5) Which of the following alphabet does not have line of symmetry?
a. G b. A c. X d. M
- 6) Which of the following figure is symmetric?
a.  b.  c.  d. 
- 7) Triangle with all sides of different lengths have ----- lines of symmetry.
a. 3 b. 0 c. 6 d. many
- 8) Which of the following alphabet has 2 lines of symmetry?
a. O b. I c. P d. K

Q-2) Fill in the blanks.

- 1) 1 hour = ----- minutes
- 2) Cone has ----- curved and ----- flat faces.
- 3) The fold line of shape is called -----
- 4) Hexagon with all sides equal have ----- lines of symmetry.
- 5) 1 minute= ----- seconds
- 6) 1hour= ----- seconds
- 7) 2 days 5 hour= ----- hours
- 8) 360 minutes= ----- hours

Q-3) Write the following time in figures.

- 1) 8 o'clock -----
- 2) 37 minutes past 10 -----
- 3) Quarter past 9 -----
- 4) Half past 7 -----
- 5) 20 minutes to 6 -----
- 6) Quarter to 10 -----

Q-4) Write the following time in words.

- 1) 8:30 -----
- 2) 5:40 -----
- 3) 9:25 -----
- 4) 4:25 -----
- 5) 10:45 -----
- 6) 3:20 -----

Q-5) Write a.m. or p.m.

- 1) I get up from the bed at 6:00 -----
- 2) Mayank goes to office at 9:30 -----
- 3) Everyday, I go to play at 4:00 -----
- 4) My father comes back from the office at 7:00 -----
- 5) Time 40 minutes after 12 midnight is 12:40 -----

Q-6) State whether following statements are true or false.

- 1) Short hand of a watch is called minute hand. -----
- 2) Ante meridiem means after midday. -----
- 3) We do not write a.m. or p.m. for 12 o'clock. -----
- 4) When the minute hand is before 6 we read it as past. -----
- 5) When minute hand is after 6 we read it as to. -----
- 6) 12 noon is 12 a.m. -----
- 7) Half past 8 in the morning is 8:30 p.m. -----

Q-7) Solve the following

- 1) Mr. Sharma starts his morning walk daily at 6:15 a.m. He completes it 7:10 a.m. How many minutes does he walk?

- 2) The movie started at 3:10 p.m. and ended at 6:10 p.m. How long did the movie last?

- 3) The flight took off for Ahmedabad from Delhi at 5:10 p.m. The plane landed at Ahmedabad at 7:35 p.m. What was the duration of the flight?

Q-8) Do as directed.

1. How many minutes are there from:

a. 9:10 a.m. to 9:45 a.m.	b. 9:35 p.m. to 9:50 p.m.

2. How many hours and minutes are there from:


a. 10:50 a.m. to 12:05 p.m.	b. 6:15 p.m. to 9:40 p.m.


3. What time will be 3 hours after:


a. 6:15 p.m.	b. 12 noon	c. 12 midnight

4. Draw rectangle and show the line of symmetry it has.

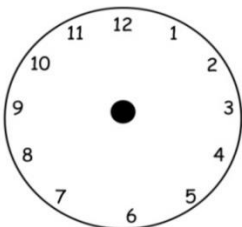
5. Write the time shown on each clock.



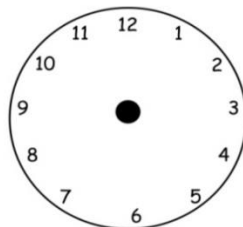




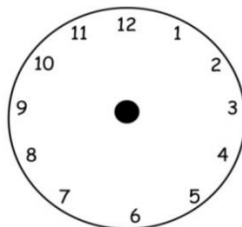
6. Draw minutes hand and hour hand on clock to show the given time.



8:25am



1:55pm



12:10am