



SHREE VASISHTHA VIDHYALAYA.



S. St. Worksheet 2024-25

Name: - _____

Std.: - IV - _____

Roll No. :- _____

Worksheet No: PA-2-02

Date: - _____

Ch.11 Our Water Resources

Q-1 Define the terms:

1) Farmland: _____

2) Deforestation: _____

3) Dam: _____

4) Canals: _____

Q-2 Name the following

1) Main source of irrigation _____

2) In the rocky terrain it is used to store water. _____

3) They are dug to divert water from the rivers or dams to the fields. _____

4) Name the state in which Indira Gandhi Canal provide water for irrigation. _____

5) One of the highest dam in India. _____

Q-3 Rejuggle the following words:

1. RAMFNLAD - _____

2. LANCAS- _____

3. OUSCIPRE- _____

4. TIONIRRIGA- _____

Q-4 Choose the correct option:

1) In which state 'Rani ki Vav' stepwell located?

a) Rajasthan

b) Gujarat

c) Punjab

2) The water that is safe to drink is called _____

a) Potable water

b) river water

c) sea water

3) In which of the following activities will you use minimum amount of water?

a) Bathing

b) brushing teeth

c) washing clothes

4) We must use water resources _____

a) Carelessly

b) Judiciously

c) Freely

- 5) Many wells have _____ that are used to draw water
- a) Persian wheels b) Drum c) Mug

Q-5 Give Reason:

- 1) We must use water resources judiciously.

- 2) Dams are called multipurpose projects.

Q-6 Picture Talk

Look at the given picture and answer the following questions

- A 1) Name the river on which Sardar Sarovar dam is built?

- 2) Name the beneficiary states of this dam?






Q-7 Complete the table with the help of Hint box:

(Odisha, Krishna, West Bengal, Punjab, Damodar, Andhra Pradesh, Mahanadi, Jharkhand, Satluj, Telangana, Haryana)

Dams/projects	Rivers	Beneficiary States
Bhakra Nangal Project		
Hirakud Dam		
Damodar Valley Project		
Nagarjuna Sagar Dam		

Q-8. Identify the following pictures:

1) 	2) 	3) 	4) 