



SHREE VASISHTHA VIDHYALAYA

EVS Worksheet 2024-25

Name: _____

Std. I - _____

Roll No. _____

Worksheet No: - PA2-05

Date: - _____

Conceptual understanding

Q-1 Tick (✓) the correct option.

1) We keep our money safe in a _____.

a) Bank

b) Hospital

c) Fire station

2) Independence Day is a _____ festival.

a) religious

b) traditional

c) national

3) _____ is not a means of recreation.

a) fighting

b) Swimming

c) Cycling

4) _____ is celebrated on 15th August.

a) Christmas

b) Independence day

c) Republic day

5) On Guru purab people eat meal at _____.

a) langar

b) dawat

c) bhoj

6) Jana Gana Mana is our national _____.

a) song

b) anthem

c) poem

7) Gandhiji was born in _____.

a) Gujarat

b) Goa

c) Rajasthan

8) _____ is the birthday of Lord Jesus.

a) Eid

b) Christmas

c) Holi

Q-2 Fill in the blanks using the words given in bracket.

[Vande Mataram, post office, National emblem,
Republic day, Eid]

- 1) _____ is celebrated on 26th January, every year.
- 2) _____ is the national song of India.
- 3) _____ is seen on currency notes.
- 4) _____ is celebrated twice a year.
- 5) The place from where we buy stamps, postcard is _____.

Q-3 Match the following pictures with their correct names.

A

B

Ans.

1) APJ Abdul Kalam


a)



1- _____

2) Mahatma Gandhi

b)



2- _____

3) Subhash Chandra Bose


c)



3- _____

4) Chacha Nehru

d)



4 - _____


Q-4 Classify the following into indoor and outdoor games.

[Cricket, Ludo, lawn tennis, chess, hockey, kho kho,
carrom, playing cards]


Indoor Game	Outdoor game

Q-5 Write the first letter of each picture to get the name of place where we offer prayers.

1)




2)



Q-5 Write the first letter of each picture to get the name of place where we offer prayers.

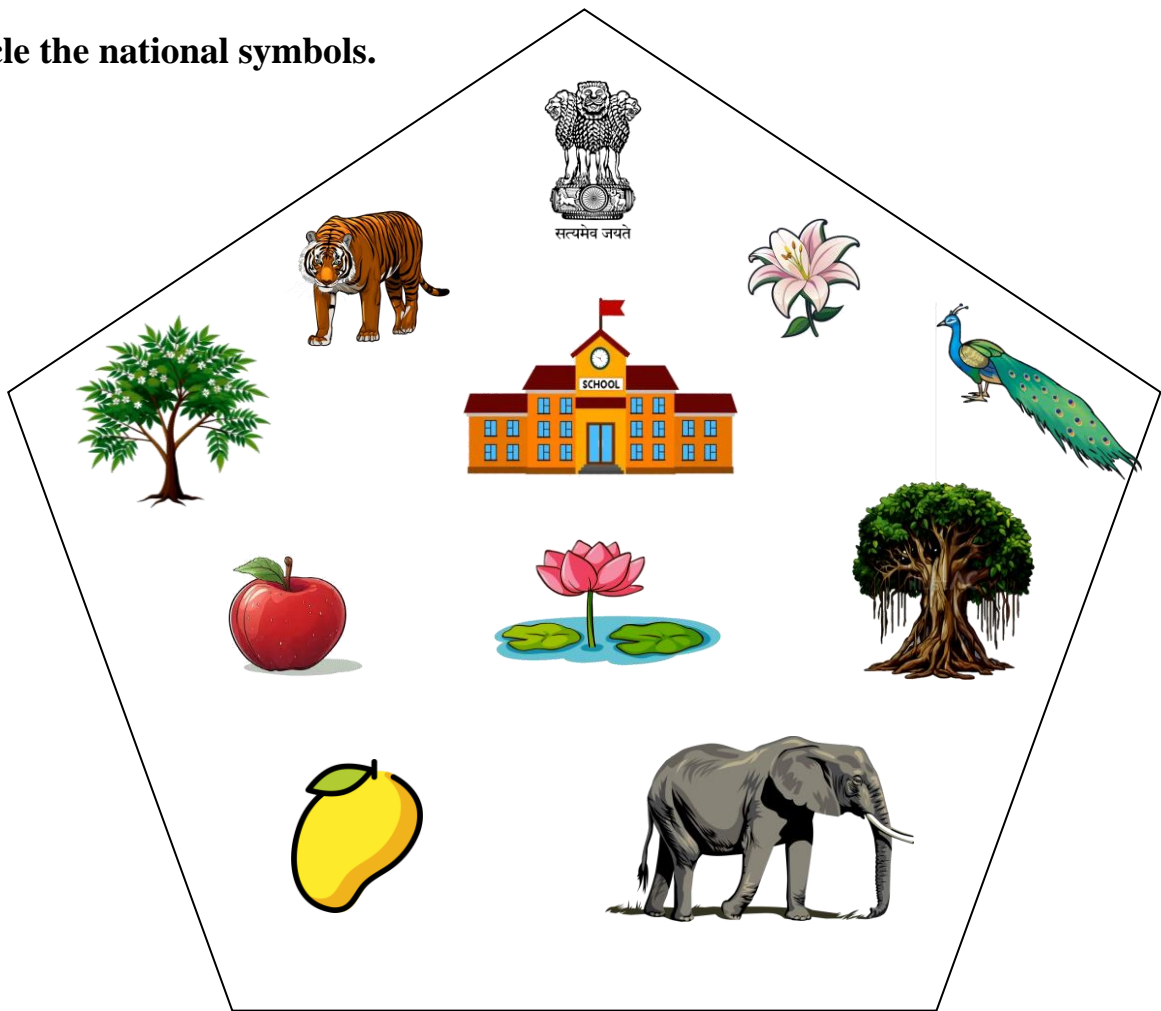
1)



2)



Q-6 Circle the national symbols.



Q-6 Circle the national symbols.

