



SHREE VASISHTHA VIDHYALAYA

EVS Worksheet 2024-2025

Name: _____

Std: I - _____

Roll No. _____


Worksheet No: - TA01-03

Date: - _____


Section A: Conceptual understanding.

Q-1 Choose the correct option.

1) It does not need air to move.




b)



c)



2) It spreads a good smell in the air.




b)



c)




3) It needs air to breathe.




b)



c)



4) Which of these need water to grow?



b)



c)



5) Water is important for all _____

a) Non-living things

b) living things

c) both

Q-2 Fill in the blanks with the help of clue box.

Fresh, invisible, wind, space, rainwater, clean

1) Air occupies _____.

2) Air is _____.

3) We should drink _____ and _____ water.

4) _____ is the main source of the water.

5) Moving air is called _____.

Q-3 Write 'T' for true and 'F' for false.

- 1) Water should be stored in clean containers.
- 2) We fill air in cycle tyres.
- 3) We should throw garbage in ponds, lakes and rivers.
- 4) We must not drink plenty of water.
- 5) A very strong wind is called a breeze.

Q-4 Unscramble the given letters.

- 1) LICEANLNESS - _____
- 2) CHKERIEFNDAH - _____
- 3) THYEAHL - _____
- 4) EESNIZNG - _____
- 5) POOSHMA - _____


Q-5 Give two examples.

- 1) Good habits - _____ , _____
- 2) Uses of water - _____ , _____
- 3) Safety Rules - _____ , _____
- 4) Uses of air - _____ , _____
- 5) Pollution - _____ , _____


Section B: Scientific skill

Q-6 Draw ☺ for good habits and ☹ for bad habits.


a)




b)




c)




d)



e)



Q-7 Colour the picture which shows saving of water.



Q-7 Colour the picture which shows saving of water.

