



SHREE VASISHTHA VIDHYALAYA

Maths Worksheet 2024-25

Name: _____

Std. I - _____

Roll No. _____

Worksheet No: - TA2 - 7

Date: - _____

Conceptual understanding

Q-1 Fill in the blanks.

- 1) _____ is the repeated form of addition.
- 2) We use _____ to buy things.
- 3) ₹ 15 = ₹ 10 + ₹ _____.
- 4) $4 + 4 + 4 + 4 + 4 + 4 = \boxed{} \times \boxed{} = \boxed{}$
- 5) Money in our country is in the form of _____ and _____.
- 6) ₹ 400 and ₹ 200 makes ₹ _____.
- 7) 5 twos are _____.
- 8) $1 + 1 + 1 + 1 + 1$ is equals to _____.
- 9) Rupees are available in the form of _____ and _____.
- 10) $9 \div 3 =$ _____.

Q-2 Write number names.

- 1) 807 - _____
- 2) 999 - _____
- 3) 18 - _____
- 4) 1000 - _____
- 5) 680 - _____

Q-3 Add or subtract the following.

- | | | | |
|---|--|--|---|
| 1) <div style="display: inline-block; text-align: center;"><div style="border: 1px solid black; border-radius: 50%; width: 30px; height: 30px; margin: 0 auto;"></div><div style="border: 1px solid black; border-radius: 50%; width: 30px; height: 30px; margin: 0 auto;"></div></div>
3 1
- 1 6
<div style="border: 1px solid black; width: 80px; height: 30px; margin: 0 auto;"></div> | 2) <div style="display: inline-block; text-align: center;"><div style="border: 1px solid black; border-radius: 50%; width: 30px; height: 30px; margin: 0 auto;"></div></div>
6 9
+ 1 7
<div style="border: 1px solid black; width: 80px; height: 30px; margin: 0 auto;"></div> | 3) <div style="display: inline-block; text-align: center;"><div style="border: 1px solid black; border-radius: 50%; width: 30px; height: 30px; margin: 0 auto;"></div></div>
2 9
+ 0 2
<div style="border: 1px solid black; width: 80px; height: 30px; margin: 0 auto;"></div> | 4) <div style="display: inline-block; text-align: center;"><div style="border: 1px solid black; border-radius: 50%; width: 30px; height: 30px; margin: 0 auto;"></div><div style="border: 1px solid black; border-radius: 50%; width: 30px; height: 30px; margin: 0 auto;"></div></div>
8 0
- 6 2
<div style="border: 1px solid black; width: 80px; height: 30px; margin: 0 auto;"></div> |
|---|--|--|---|

Q-4 Solve the division sums.

1) $3 \overline{) 9}$

2) $6 \overline{) 12}$


3) $9 \overline{) 81}$

4) $5 \overline{) 45}$

Mental Ability


Q-1 Write the multiplication fact.

1)



\times =

2)



\times =


Q-2 Circle the equal group.

a)



$8 \div 4 =$ _____

b)



$12 \div 3 =$ _____

Q-3 Find out who has more money.



Rajesh

₹ 5	₹ 50
₹ 10	₹ 100

= ₹ _____



Teena

₹ 500	₹ 200
₹ 100	₹ 100

= ₹ _____

_____ has more money than _____.

Q-4 Count and write the total amount.

1)  +  +  = _____

2)  +  +  +  = _____

3)  +  = _____

4)  +  +  = _____

Q-4 Count and write the total amount.

1)  +  +  = _____

2)  +  +  +  = _____

3)  +  = _____

4)  +  +  = _____

Tables

$$1) \quad 10 \times 4 = \underline{\hspace{2cm}}$$

$$6) \quad 5 \times \underline{\hspace{2cm}} = 25$$

$$2) \quad \underline{\hspace{2cm}} \times 5 = 35$$

$$7) \quad 6 \times \underline{\hspace{2cm}} = 42$$

$$3) \quad 8 \times \underline{\hspace{2cm}} = 72$$

$$8) \quad 2 \times \underline{\hspace{2cm}} = 16$$

$$4) \quad \underline{\hspace{2cm}} \times 10 = 0$$

$$9) \quad \underline{\hspace{2cm}} \times 9 = 9$$

$$5) \quad 9 \times 7 = \underline{\hspace{2cm}}$$

$$10) \quad 9 \times \underline{\hspace{2cm}} = 54$$

Tables

$$1) \quad 10 \times 4 = \underline{\hspace{2cm}}$$

$$6) \quad 5 \times \underline{\hspace{2cm}} = 25$$

$$2) \quad \underline{\hspace{2cm}} \times 5 = 35$$

$$7) \quad 6 \times \underline{\hspace{2cm}} = 42$$

$$3) \quad 8 \times \underline{\hspace{2cm}} = 72$$

$$8) \quad 2 \times \underline{\hspace{2cm}} = 16$$

$$4) \quad \underline{\hspace{2cm}} \times 10 = 0$$

$$9) \quad \underline{\hspace{2cm}} \times 9 = 9$$

$$5) \quad 9 \times 7 = \underline{\hspace{2cm}}$$

$$10) \quad 9 \times \underline{\hspace{2cm}} = 54$$