



Name: _____

Std.: - I - _____

Roll No. _____

Worksheet No: - CA1- 01

Date: - _____

Q-1 Fill in the blanks with the help of clue box.

Chair, electricity, manual, Flower, machine, Computer

- 1) A _____ is a smart machine.
- 2) _____ is a natural thing.
- 3) _____ is a man - made thing.
- 4) Electronic machines run on _____.
- 5) Typewriter is a _____ machine.
- 6) A _____ can work very fast and save time.






Q-2 Write 'T' for true or 'F' for false.

- 1) Nail cutter is a manual machine. - _____
- 2) Mixer is an electronic machine. - _____
- 3) Manual machines run on electricity. - _____
- 4) Computer cannot remember many things. - _____
- 5) We watch many programs and cartoons on television. - _____

Q-3 Circle the correct word.

- 1) Machines make our work **easy** / **tough**.
- 2) **Mobile** / **Tree** is created by nature.
- 3) **Bicycle** / **Vacuum cleaner** is used to clean our house.
- 4) A **computer** / **car** can help you to draw and paint a picture.
- 5) A **Sharpener** / **Refrigerator** is a manual machine.
- 6) A computer **never** / **always** makes mistake.

Q-4 Write M for man made things and write N for natural things.

1) 	2) 	3) 	4) 	5) 
<input type="text"/>	<input type="text"/>	<input type="text"/>	<input type="text"/>	<input type="text"/>

Q-5 Tick '✓' the correct answer.

- 1) Which of the following is used to move from one place to another?

a) video game	b) bus	c) television
---------------	--------	---------------
- 2) Which of the following is a natural thing?









a) ball	b) mobile	c) tree
---------	-----------	---------
- 3) Which of the following help us to iron our clothes?

a) computer	b) iron	c) mixer
-------------	---------	----------
- 4) Which machine runs on diesel, petrol or CNG?

a) car	b) television	c) bicycle
--------	---------------	------------
- 5) A computer never gets _____.

a) start	b) close	c) tired
----------	----------	----------

Q-6 Tick '✓' the pictures which are machines.

			
<input type="text"/>	<input type="text"/>	<input type="text"/>	<input type="text"/>
			
<input type="text"/>	<input type="text"/>	<input type="text"/>	<input type="text"/>

12/4