

VASISHTHA GENESIS SCHOOL, BARDOLI
(Academic Session: 2024-25)

Date: _____	Class: 1	Div: A/B/C	Roll No: _____	Sub: Maths
Name: _____			Worksheet: 1 CT-2	


Ch-8 MEASUREMENT

i. Arrange the following objects in order by writing.

a) 1 for the lightest weight and 4 for the heaviest weight.



b) 1 for the smallest length and 4 for the longest length.




c) 1 for the smallest length and 4 for the longest length.




d) 1 for the least capacity and 4 for the most capacity.



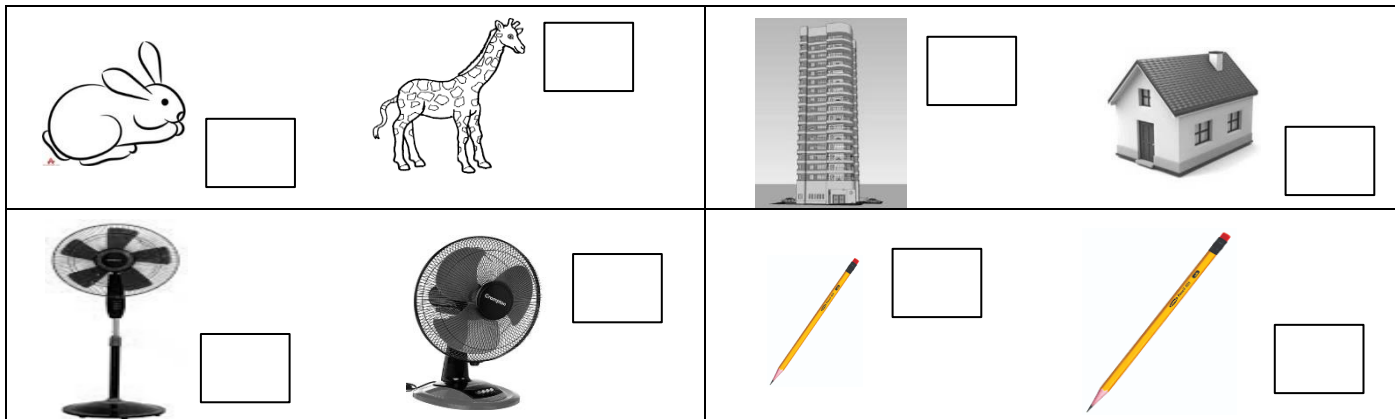
ii. Circle the one that weighs more in the following:



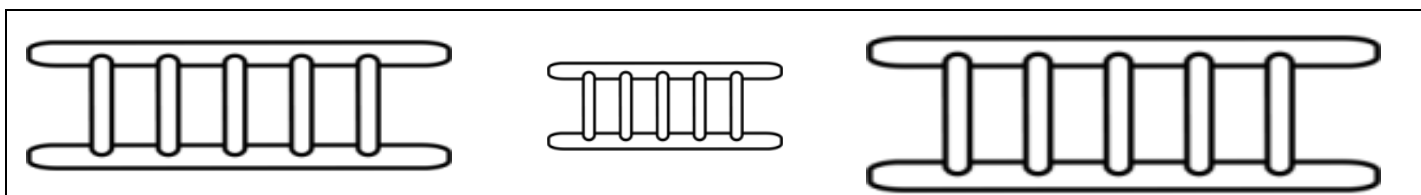
iii. Circle the one that weighs the most in the following:



iv. Tick (✓) the longer or taller one in the following:



v. Cross (x) the shortest object in the following:



vi. How long are these objects:

<p>About _____ paper clips.</p>	<p>About _____ paper clips.</p>
<p>Sharpener is _____ c.m</p>	<p>Pencil is _____ c.m</p>