

**VASISHTHA GENESIS SCHOOL, BARDOLI**

(Academic Session: 2025-26)

Date: \_\_\_\_\_ Class:2 Div: \_\_\_\_\_ Roll No: \_\_\_\_\_ Sub: Maths  
Name: \_\_\_\_\_ Worksheet: Ch -12 WS 4

**Ch-12 – Data Handling****Q1. Look at the chart or data and answer the questions below it:**

<b>Fruits</b>	No of Students
Apple	5
Banana	8
Mango	6
Orange	4
Grapes	7

i. Which fruit is the most popular among students?

\_\_\_\_\_

ii. What is the total number of students surveyed?

\_\_\_\_\_

iii. How many students like Mango ?

\_\_\_\_\_

iv. How many students like Banana ?

\_\_\_\_\_

<b>Subject</b>	No of Students
Math	10
Science	12
English	8
History	6
Art	5

i. What subject has 10 students?

\_\_\_\_\_

ii. How many subjects have more than 6 students?

\_\_\_\_\_














iii. Which subject has the second highest number of students?

\_\_\_\_\_

iv. How many subjects have fewer than 8 students?

\_\_\_\_\_

**Q2. Sort the things from the given box and write answer in the given blanks:**

























<b>Tomato</b>	   
<b>Brinjal</b>	
<b>Capsicum</b>	  
<b>Carrot</b>	    

i. There are \_\_\_\_\_ tomatoes.

ii. How many capsicums are there? \_\_\_\_\_

iii. There is a \_\_\_\_\_ brinjal.

iv. How many carrots are there? \_\_\_\_\_

<b>Balloon</b>	       
<b>Parrot</b>	      
<b>Pen</b>	 
<b>Toy</b>	      

i. There are \_\_\_\_\_ parrots.

ii. How many dolls are there? \_\_\_\_\_

iii. There are \_\_\_\_\_ balloons.

iv. How many pens are there? \_\_\_\_\_