

Date: _____ Class: I Div: A / B / C Roll No: _____ Sub: Computer
Name: _____ Worksheet: CT 2 – 05

Ch – 3 Paint – Introduction (Answer Key)

Q1. Choose the correct option and answer the following questions:

- i. Eraser tool is present in the _____ group.
(a) Shapes (b) Colors (c) **Tools** (d) Font
- ii. _____ area is the blank area where you draw and paint.
(a) Tabs (b) Ribbon (c) **Drawing** (d) Colours
- iii. Which group has different shapes like oval, rectangle, diamond, etc.
(a) Zoom (b) **Shapes** (c) Clipboard (d) Image
- iv. We click on _____ button to save our drawing.
(a) Open (b) **Save** (c) Close (d) Print
- v. _____ program is used to draw and colour pictures and shapes.
(a) **Paint** (b) Calculator (c) Notepad (d) WordPad
- vi. _____ contains different groups.
(a) **Ribbon** (b) Tab (c) Colors (d) Canvas

Q2. State whether the following statements are 'True' or 'False':

- i. The Fill with Color tool is used to fill colours in your drawing. **True**
- ii. We can type text in Paint program. **True**
- iii. We cannot change the size of the eraser. **False**
- iv. Brushes tool is used just like a real paint brush. **True**
- v. Oval tool is used to erase a drawing. **False**
- vi. The Size button is used to change the colour of your drawing **False**

Q3. Fill in the blanks with the words given in box:









Pencil, right, Shapes, Tabs, Polygon

- i. **Pencil** tool is like a real pencil which is used for making drawings.
- ii. **Polygon** tool is used to make a shape with any number of sides.
- iii. Line tool is present in the **Shapes** group.
- iv. Colors group is in the **right** side of the Ribbon.
- v. Home and View are two main **Tabs**, which contains different commands.






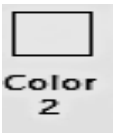

Q4. Complete the given words.

i. T <u>A</u> B <u>S</u>	ii. H <u>A</u> M <u>A</u>
iii. P A <u>I</u> N <u>T</u>	iv. T O <u>O</u> L <u>S</u>
v. V <u>I</u> <u>E</u> W	vi. P <u>O</u> L Y <u>G</u> O N
vii. C <u>U</u> R V <u>E</u>	viii. R <u>I</u> B B <u>O</u> N

Q5. Match the following columns:

Column 'A'	Ans	Column 'B'
i. Fill with Color tool	i. <u>E</u>	(a) 
ii. Magnifier tool	ii. <u>F</u>	(b) 
iii. Oval tool	iii. <u>B</u>	(c) 
iv. Text tool	iv. <u>A</u>	(d) 
v. Line tool	v. <u>C</u>	(e) 
vi. Curve tool	vi. <u>D</u>	(f) 
vii. Rectangle tool	vii. <u>H</u>	(g) 
viii. Pencil tool	viii. <u>G</u>	(h) 

Q6. Identify the following pictures and circle the correct option:

i. 	ii. 
Text tool / Polygon tool	Foreground Color / Background Color
iii. 	iv. 
Colors group / Tools group	Image group / Shapes group
v. 	vi. 
Brushes tool / Pencil tool	Fill with Color tool / Background Color
vii. 	
Colors group / Tools group	