

**VASISHTHA GENESIS SCHOOL, BARDOLI**

(Academic Session: 2025-26)

Date: \_\_\_\_\_ Class:2 Div: \_\_\_\_\_ Roll No: \_\_\_\_\_ Sub: Maths  
Name: \_\_\_\_\_ Worksheet: Ch -12 WS 4

**Ch-12 – Data Handling****Q1. Look at the chart or data and answer the questions below it:**

Fruits	No of Students
Apple	5
Banana	8
Mango	6
Orange	4
Grapes	7

- i. Which fruit is the most popular among students?

Banana

- ii. What is the total number of students surveyed?

30

- iii. How many students like Mango ?

6 Students

- iv. How many students like Banana ?

8 students

Subject	No of Students
Math	10
Science	12
English	8
History	6
Art	5

- i. What subject has 10 students?

Math

- ii. How many subjects have more than 6 students?

3 subjects














- iii. Which subject has the second highest number of students?

Math

























iv. How many subjects have fewer than 8 students?

2 students

Q2. Sort the things from the given box and write answer in the given blanks:

Tomato	   
Brinjal	
Capsicum	  
Carrot	    

- i. There are 4 tomatoes.
- ii. How many capsicums are there? 3
- iii. There is a 1 brinjal.
- iv. How many carrots are there? 5

Balloon	       
Parrot	      
Pen	 
Toy	      

- i. There are 7 parrots.
- ii. How many dolls are there? 7
- iii. There are 8 balloons.
- iv. How many pens are there? 2