



SHREE VASISHTHA VIDHYALAYA

Social Studies Worksheet 2025-26



Name : - _____

Std :- IV - _____

Roll No. :- _____ Worksheet No : CA-5

Date : - _____

(Ch-15 Reaching places, Ch-16 Shelter for everyone, Ch-17 Understanding local institution)

Q-1) Multiple choice questions.

- 1) The art of drawing map is called _____
a) **Cartography** b) Cartographer c) Sketch
- 2) People of which area live in flats and Bungalows?
a) Village b) Rural c) **Urban**
- 3) Who helps in maintaining laws and orders?
a) Doctor b) Lawyer c) **The police**
- 4) _____ color represent the water.
a) Green b) **Blue** c) Yellow
- 5) What is primary purpose of a house?
a) Entertainment b) **Providing shelter and protection** c) Growing plants
- 6) Needle of compass always point towards which direction?
a) **North** b) South c) east

Q-2) Fill In the blanks:

- 1) A book of map is called **Atlas**.
- 2) Provision to let the light and fresh air come into the room is called. **Ventilation**
- 3) **Municipal office** is the administrative center of the city.
- 4) A **Sketch** is rough drawing of a place drawn without scale.
- 5) **Dharavi** of Mumbai is the largest slum area in India.
- 6) A **Fire station** is a place where fire fighters work to put out fires.

Q-3) Write true and false.

- 1) We should appreciate and respect the people who help us in our daily life. **True**
- 2) North west direction lies between south and west. **False**
- 3) The landmark are easily recognizable places. **True**
- 4) In urban area people lives in huts. **False**
- 5) Anganwadi aids children`s growth and learning. **True**
- 6) We can call ambulance by dialing the number 102 and 108. **True**

Q-4) Who am I?

- 1) I am a representation of a place or a part of it on a flat surface.
Map
- 2) I shows the states and the national boundaries of a place.
Political map
- 3) I am a colonies of small and temporary huts found in some areas of the big cities.
Slums

4) I am a place where people buy food, clothes, and other things they need.

Market

5) I provide Nutritious food and education for children.

Anganwadi

Q-5) Rejuggle the word correctly.

1) MOLSYBS

SYMBOLS

2) TNRACACITA

ANTARCTICA

2) AIARCDNL

CARDINAL

4) RTEHSLE

SHELTER

Q-6) Classify the following.


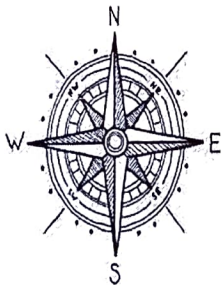

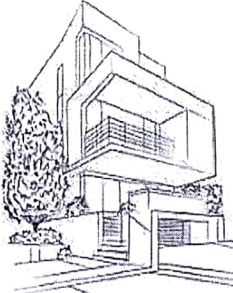

(Rivers, Rainfall, Gujarat, Mountains, Vegetation, Jaipur, Forest, National parks, Chandigarh)

Political map	Physical map	Thematic map
Gujarat	Rivers	Rainfall
Jaipur	Mountains	Vegetation
Chandigarh	Forest	National park


(Bricks, Mud, Cements, Straw, Iron, Dried leaves)

Kutcha house	Pucca house
Mud	Bricks
Straw	Cement
Leaves	Iron

Q-7) Identify the following pictures:

				
Slums	Compass	Mud house	Bungalow	Post office

Q-8) Picture Talk:

<p>A.</p> <p>a) Name the local institution. Hospital</p> <p>b) It helps us to stay Healthy and recover from Illness.</p> <p>c) Who take care of sick people? Doctors and nurse</p>	
<p>B.</p> <p>a) Identify the picture. Panchayat</p> <p>b) Who is head of Gram Panchayat? Sarpanch</p> <p>c) What is role of Panchayat? Panchayat take care of things like cleanliness, water supply, and community events.</p>	