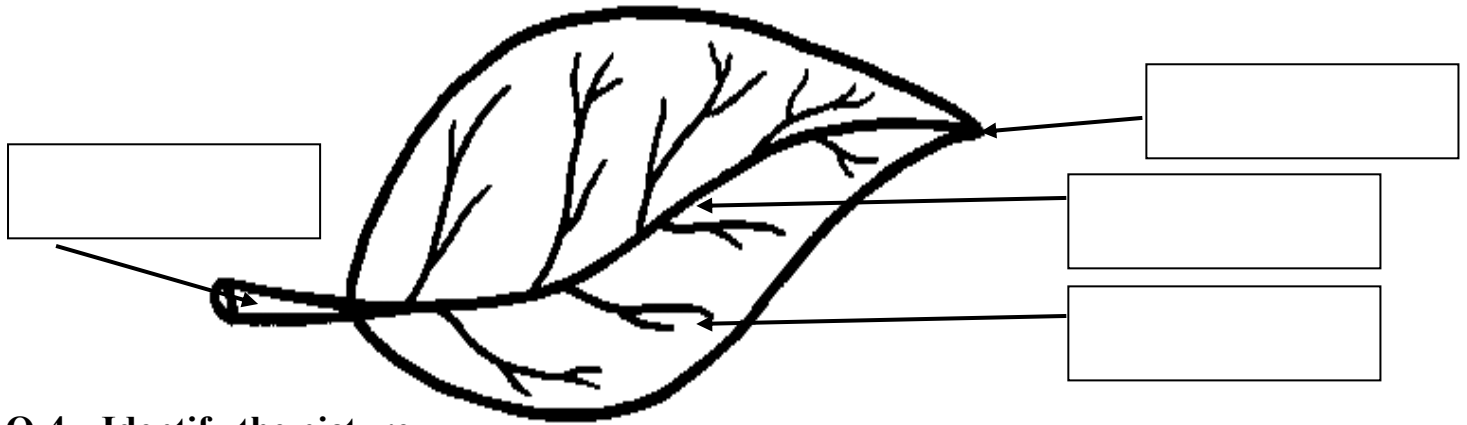



Q-3 Label the diagram of leaf.



Q-4 Identify the picture.

1)



2)



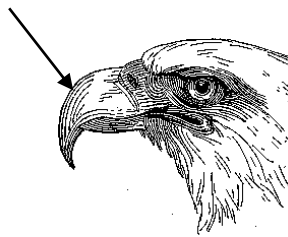
3)



4)




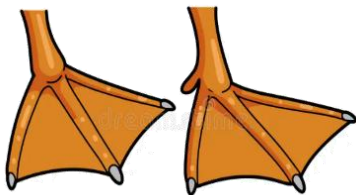
5)



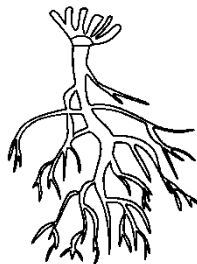
6)



7)



8)



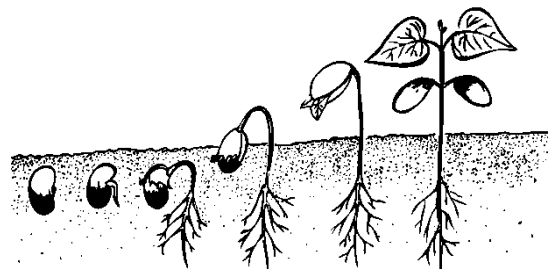
9)



10)



11)



Q-5 Give two examples for each of the following.

- | | |
|---------------------------|---------------|
| 1) Roots we eat | _____ , _____ |
| 2) Seeds we eat | _____ , _____ |
| 3) Leaves we eat | _____ , _____ |
| 4) Fruits with many seeds | _____ , _____ |
| 5) Flowers we eat | _____ , _____ |

Q-6 Match the following.

- | A | B | Ans. |
|------------------|-----------------------------|-------------|
| 1) Creepers | a) ducks, swans | 1- _____ |
| 2) stem | b) long slender beak | 2- _____ |
| 3) Water birds | c) weak stem | 3- _____ |
| 4) Down feathers | d) bear branches and leaves | 4- _____ |
| 5) Humming Bird | e) sharp claws | 5- _____ |
| 6) Talons | f) fine and fluffy | 6- _____ |

Q-5 Give two examples for each of the following.

- | | |
|---------------------------|---------------|
| 1) Roots we eat | _____ , _____ |
| 2) Seeds we eat | _____ , _____ |
| 3) Leaves we eat | _____ , _____ |
| 4) Fruits with many seeds | _____ , _____ |
| 5) Flowers we eat | _____ , _____ |

Q-6 Match the following.

- | A | B | Ans. |
|------------------|-----------------------------|-------------|
| 1) Creepers | a) ducks, swans | 1- _____ |
| 2) stem | b) long slender beak | 2- _____ |
| 3) Water birds | c) weak stem | 3- _____ |
| 4) Down feathers | d) bear branches and leaves | 4- _____ |
| 5) Humming Bird | e) sharp claws | 5- _____ |
| 6) Talons | f) fine and fluffy | 6- _____ |

Q-7 Circle the odd one out.

- | | | | |
|-----------|---------|---------|-----------|
| 1) bud | flower | fruits | beak |
| 2) beans | grass | carrot | peepal |
| 3) Neem | Mango | Banana | Banyan |
| 4) eagles | sparrow | vulture | hawks |
| 5) hen | duck | crow | butterfly |
| 6) grass | twigs | pebbles | bricks |

Q-8 Complete the following sentences.

- 1) Birds are the only animals _____
- 2) Hatching means to keep the eggs warm _____
- 3) Birds use their beaks to _____
- 4) Moulds and Mushrooms are _____
- 5) Migration is the _____

Q-7 Circle the odd one out.

- | | | | |
|-----------|---------|---------|-----------|
| 1) bud | flower | fruits | beak |
| 2) beans | grass | carrot | peepal |
| 3) Neem | Mango | Banana | Banyan |
| 4) eagles | sparrow | vulture | hawks |
| 5) hen | duck | crow | butterfly |
| 6) grass | twigs | pebbles | bricks |

Q-8 Complete the following sentences.

- 1) Birds are the only animals _____
- 2) Hatching means to keep the eggs warm _____
- 3) Birds use their beaks to _____
- 4) Moulds and Mushrooms are _____
- 5) Migration is the _____