



Std: III -

Date: -

5) There are seven oceans in the world.

**Q-4 Answer in one word.**

- 1) The brightest star in the night sky. \_\_\_\_\_
- 2) The first person to prove that the Earth is round. \_\_\_\_\_
- 3) I am round in shape and I support life. \_\_\_\_\_
- 4) The closest star to us. \_\_\_\_\_
- 5) The only country after which an ocean has been named. \_\_\_\_\_

**Q-5 Define.**

- 1) Coast: \_\_\_\_\_  
\_\_\_\_\_
- 2) Heavenly Bodies : \_\_\_\_\_  
\_\_\_\_\_
- 3) Compass: \_\_\_\_\_  
\_\_\_\_\_


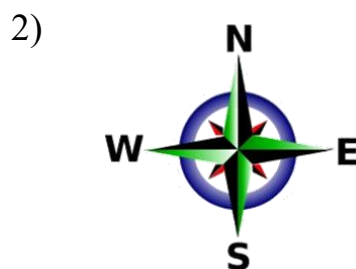
**Q-6 Unscramble.**

- |                     |                  |
|---------------------|------------------|
| 1) ZROHION - _____  | 4) STAOC - _____ |
| 2) AGELLMAN - _____ | 5) OLGEB - _____ |
| 3) HEART - _____    | 6) COAEN - _____ |

**Section B Map and Activity**

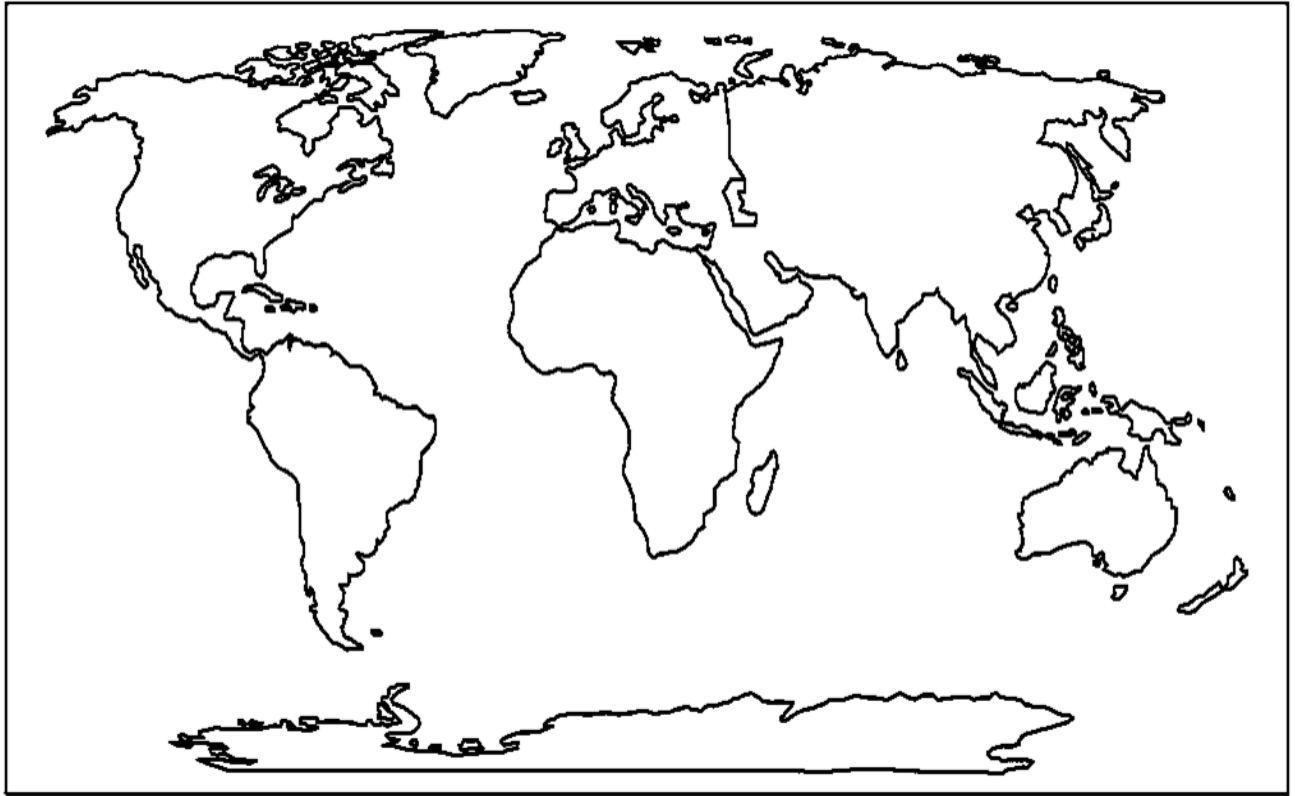
**Q-1 Identify the pictures and write their names.**

[compass, Direction, Solar System, Horizon, Ferdinand Magellan, globe,]



**Q-2** Locate the following oceans on the given world map.

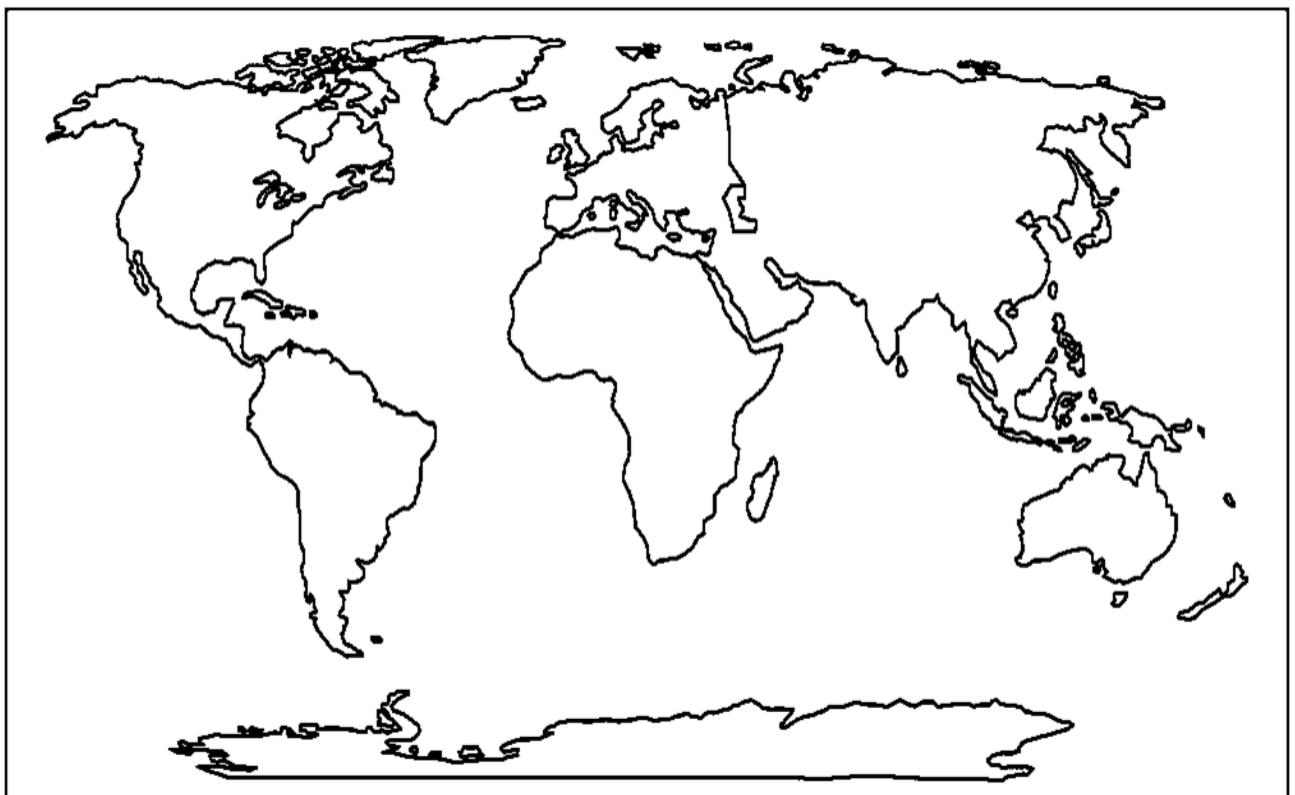
**[Indian Ocean, Atlantic Ocean, Antarctic Ocean, Pacific Ocean, Arctic Ocean]**



---

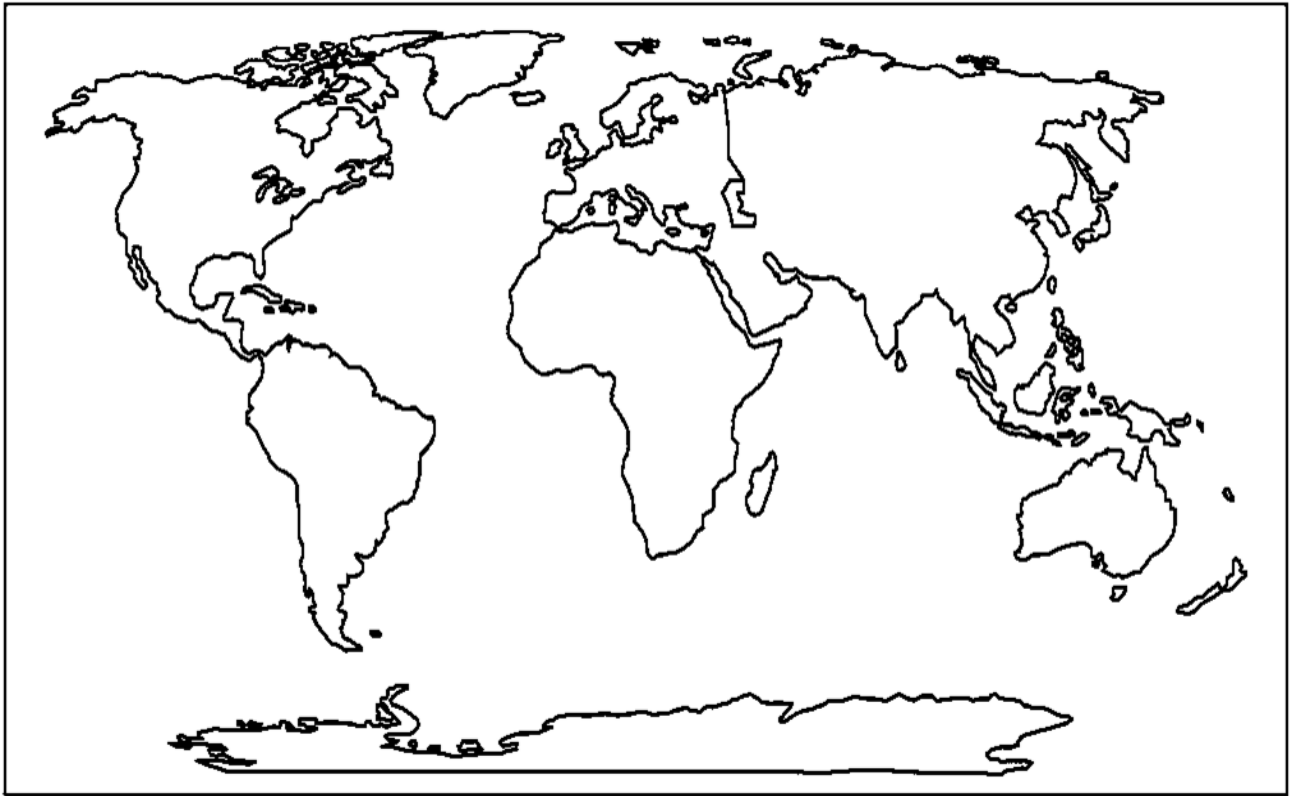
**Q-2** Locate the following oceans on the given world map.

**[Indian Ocean, Atlantic Ocean, Antarctic Ocean, Pacific Ocean, Arctic Ocean]**



**Q-3** Locate the following continents on the given world map.

[Asia, Africa, North America, Antarctica, South America, Europe, Australia]



---

**Q-3** Locate the following continents on the given world map.

[Asia, Africa, North America, Antarctica, South America, Europe, Australia]

