



SHREE VASISHTHA VIDHYALAYA

Social Studies Worksheet 2025-26

Name: ANSWER KEY

Std: III - _____

Roll No. _____

Worksheet No: - CA1-01

Date: - _____

Conceptual Understanding:

Q-1 Tick (✓) the correct answer.

- 1) The Solar system is a part of _____.
a) ~~Milky way~~ b) compass c) Orion
- 2) ~~Plantes~~ ^{Planets} revolve around the sun in a fixed path called _____.
a) plane b) ~~orbit~~ c) meteor
- 3) _____ of the earth is covered by water.
a) One-fourth b) one- fifth c) ~~three-fourth~~
- 4) A compass is used by _____.
a) ~~Sailors~~ b) writers c) Doctors
- 5) The Earth completes one rotation in _____.
a) 5 hours b) ~~24 hours~~ c) 10 hours
- 6) The _____ is at the center of the solar system.
a) Moon b) planet c) ~~Sun~~

Q-2 Fill in the blanks with the help of the bracket given.

[Satellites, Sun, galaxies, Astronomers, planets, $365\frac{1}{4}$, Australia]

- 1) Celestial bodies that revolve around the planet are called Satellites.
- 2) The Sun and the planets make up the solar system.
- 3) Astronomers are scientists that study celestial bodies.
- 4) Large clusters of stars are called galaxies.
- 5) The Earth takes $365\frac{1}{4}$ days to complete one revolution.
- 6) Australia is the smallest continent.

Q-3 Write 'T' for True and 'F' for False statements.

- 1) The Pacific Ocean is the largest ocean on the Earth.
- 2) Mercury is the smallest planet in the solar system.
- 3) The moon is at the center of the solar system.
- 4) Saturn is no longer considered as a planet.
- 5) There are seven oceans in the world.

T
T
F
F
F

Q-4 Answer in one word.

- 1) The brightest star in the night sky. Sirius
- 2) The first person to prove that the Earth is round. Ferdinand Magellan
- 3) I am round in shape and I support life. Earth
- 4) The closest star to us. Sun
- 5) The only country after which an ocean has been named. India

Q-5 Define.

- 1) Coast: A place where land and the sea meet
- 2) Heavenly Bodies : All the planets, the sun, the moon and the stars
- 3) Compass: A device used by sailors to find directions

Q-6 Unscramble.


- | | |
|-------------------------------|-------------------------|
| 1) ZROHION - <u>HORIZON</u> | 4) STAOC - <u>COAST</u> |
| 2) AGELLMAN - <u>MAGELLAN</u> | 5) OLGEB - <u>GLOBE</u> |
| 3) HEART - <u>EARTH</u> | 6) COAEN - <u>OCEAN</u> |

Section B Map and Activity

Q-1 Identify the pictures and write their names.

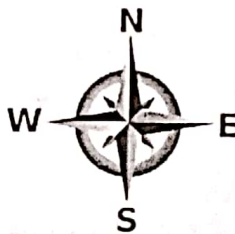
[compass, Direction, Solar System, Horizon, Ferdinand Magellan, globe,]

1)



HORIZON

2)



DIRECTIONS

3)



COMPASS

4)



SOLAR SYSTEM

5)



GLOBE

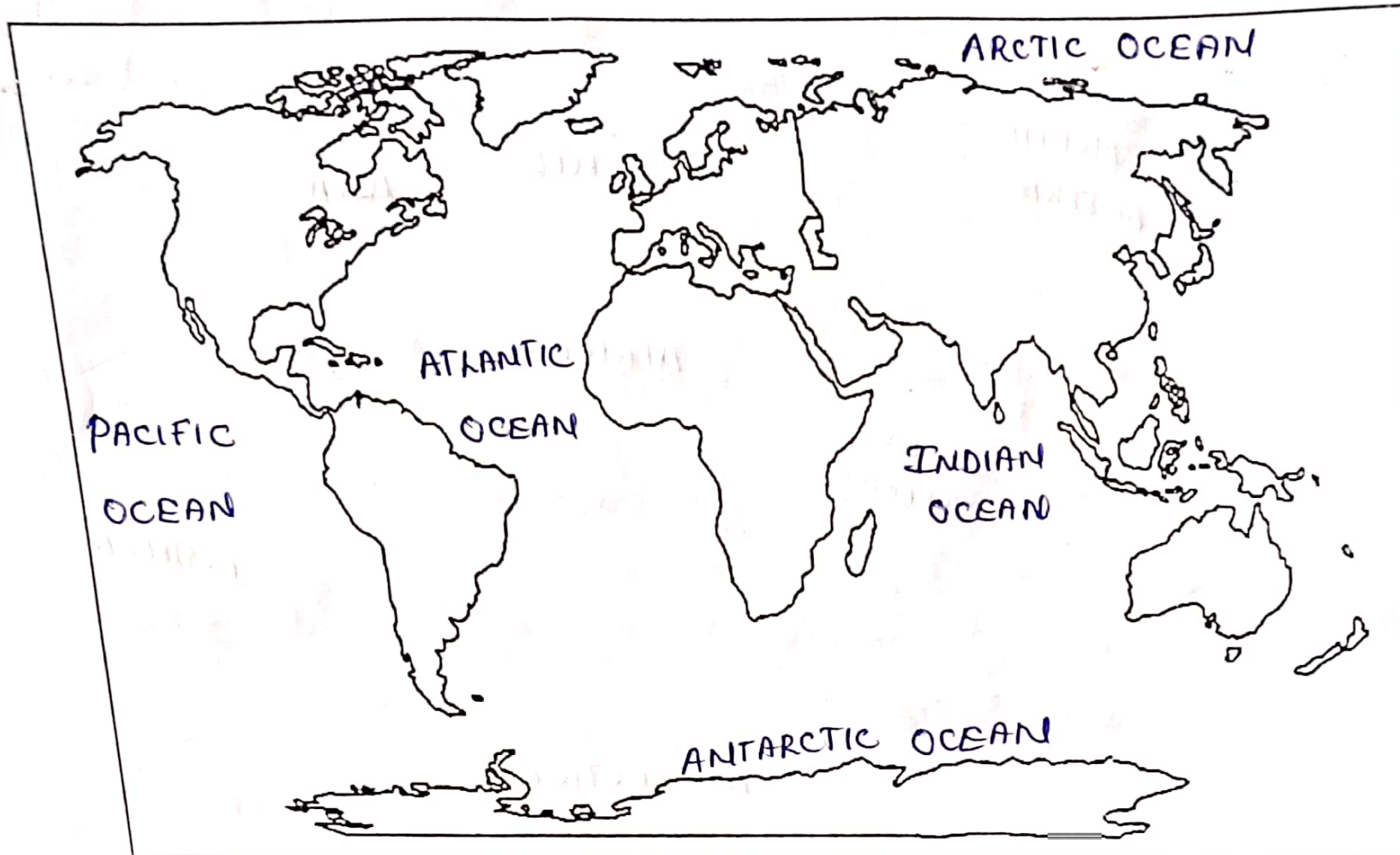
6)



FERDINAND
MAGELLAN

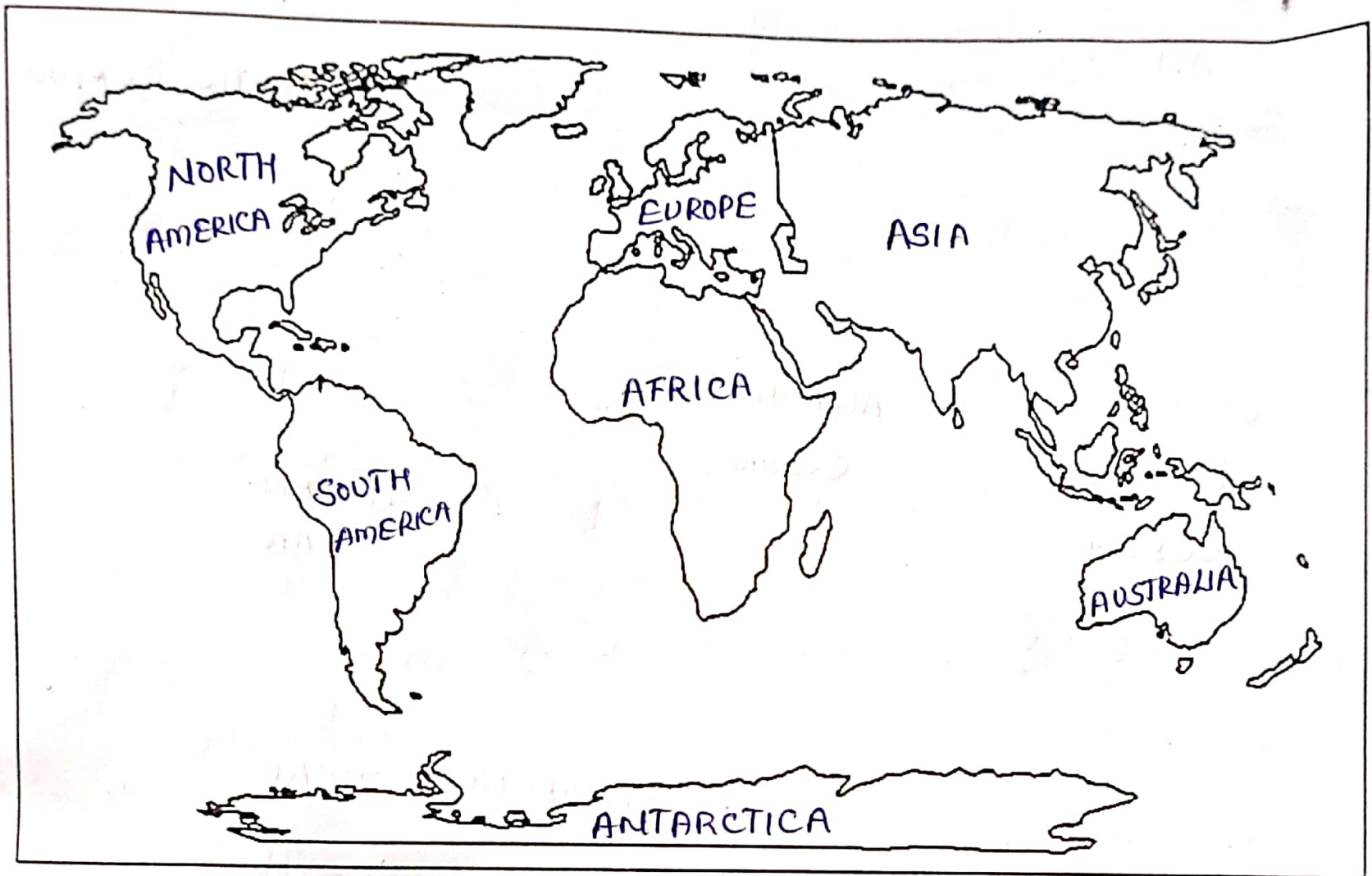
Q-2 Locate the following oceans on the given world map.

[Indian Ocean, Atlantic Ocean, Antarctic Ocean, Pacific Ocean, Arctic Ocean]



Q-3 Locate the following continents on the given world map.

[Asia, Africa, North America, Antarctica, South America, Europe, Australia]



Q
19/6