



SHREE VASISHTHA VIDHYALAYA

Maths Worksheet 2025-26

Name: _____

Std. I - _____

Roll No. _____

Worksheet No: - CA1-01

Date: - _____

Conceptual understanding

Q-1 Given below are the name of some fruits.

- a) Count and write the number of letters and answer the following questions.

No.	Name	Number of letters
1	APPLE	
2	BANANA	
3	PINEAPPLE	
4	GUAVA	
5	KIWI	
6	CHERRY	

- b) Write the name of the fruit that has four letters.

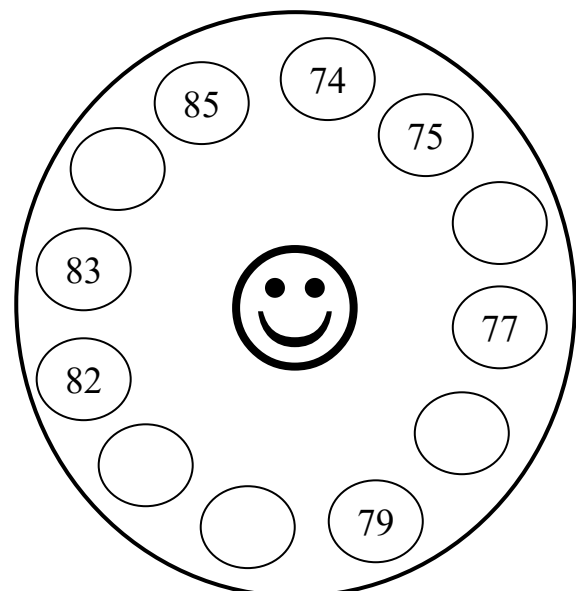
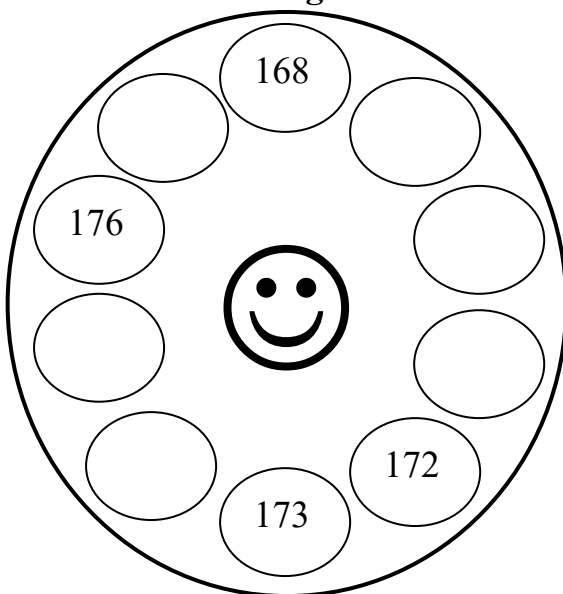
- c) How many fruits have more than six letters?

- d) How many fruits have five letters?

- e) How many times 'P' comes in all the fruits together?

- f) How many times 'E' comes in all the fruits together?

Q-2 Fill in the missing numbers.



Q-3 Add and subtract the given numbers.

1) 5 + 4 <input style="width: 50px; height: 20px;" type="text"/>	2) 6 - 2 <input style="width: 50px; height: 20px;" type="text"/>	3) 9 + 0 <input style="width: 50px; height: 20px;" type="text"/>	4) 7 - 5 <input style="width: 50px; height: 20px;" type="text"/>
---	---	---	---

Q-4 Write the ordinal numbers in the boxes observing the word “COMPUTER”

- | | |
|--|--|
| 1) M is the <input style="width: 50px; height: 20px;" type="text"/> letter | 4) P is the <input style="width: 50px; height: 20px;" type="text"/> letter |
| 2) C is the <input style="width: 50px; height: 20px;" type="text"/> letter | 5) R is the <input style="width: 50px; height: 20px;" type="text"/> letter |
| 3) E is the <input style="width: 50px; height: 20px;" type="text"/> letter | 6) O is the <input style="width: 50px; height: 20px;" type="text"/> letter |

Q-5 Write the ordinal number names for the given numbers.

- | | |
|--------------------------|---------------------------|
| 1) 2 nd _____ | 4) 10 th _____ |
| 2) 6 th _____ | 5) 3 rd _____ |
| 3) 9 th _____ | 6) 1 st _____ |

Q-6 Do as directed.

a) **Arrange the given number in ascending order.**

- 1) 48, 59, 63, 22, 35

b) **Arrange the given number in descending order.**


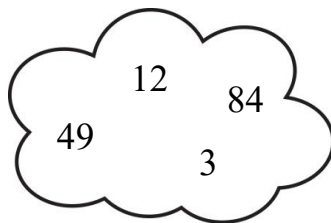

- 2) 90, 60, 100, 30, 50

Mental Ability

Q-1 Compare the numbers and put the sign (<, >, =)

- | | |
|--|--|
| 1) 87 <input style="width: 50px; height: 20px;" type="text"/> 49 | 4) 120 <input style="width: 50px; height: 20px;" type="text"/> 102 |
| 2) 108 <input style="width: 50px; height: 20px;" type="text"/> 198 | 5) 25 <input style="width: 50px; height: 20px;" type="text"/> 25 |
| 3) 90 <input style="width: 50px; height: 20px;" type="text"/> 100 | 6) 12 <input style="width: 50px; height: 20px;" type="text"/> 21 |

Q-2 Cross the greatest number.



Q-3 Tick the correct option

1) Which is the smallest number?

a) 13**b) 3****c) 31**

2) How many does five and 2 make.

a) 8**b) 9****c) 7**3) There are _____ letters in the word “**BLACKBOARD**”**a) 10****b) 9****c) 11**

4) The _____ sign indicates addition.

a) -**b) ×****c) +****Tables**

1) $0 \times 6 = \boxed{}$

6) $0 \times 10 = \boxed{}$

2) $1 \times 8 = \boxed{}$

7) $2 \times 2 = \boxed{}$

3) $2 \times 5 = \boxed{}$

8) $1 \times 10 = \boxed{}$

4) $2 \times 9 = \boxed{}$

9) $0 \times 1 = \boxed{}$

5) $1 \times 2 = \boxed{}$

10) $2 \times 7 = \boxed{}$

Q-3 Tick the correct option

5) Which is the smallest number?

b) 13**b) 3****c) 31**

6) How many does five and 2 make.

b) 8**b) 9****c) 7**7) There are _____ letters in the word “**BLACKBOARD**”**b) 10****b) 9****c) 11**

8) The _____ sign indicates addition.

b) -**b) ×****c) +****Tables**

1) $0 \times 6 = \boxed{}$

6) $0 \times 10 = \boxed{}$

2) $1 \times 8 = \boxed{}$

7) $2 \times 2 = \boxed{}$

3) $2 \times 5 = \boxed{}$

8) $1 \times 10 = \boxed{}$

4) $2 \times 9 = \boxed{}$

9) $0 \times 1 = \boxed{}$

5) $1 \times 2 = \boxed{}$

10) $2 \times 7 = \boxed{}$