

VASISHTHA GENESIS SCHOOL, BARDOLI





(Academic Session: 202526)

Date: _____ Class: 3 Div: A / B / C Roll No: _____ Sub: S.S
Name: _____ Worksheet: ANSWERKEY REVISION HYL WS

Q1. Match the column.

A	B	ANS.
i. tool	a. Maharashtra	I - J
ii. Spices	b. Marathi	II - i
iii. Salwar kameez	c. rubbing two bamboo sticks	III - h
iv. Largest ocean	d. Phiran	IV - g
v. India independence	e. Delhi	V - f
vi. Capital of India	f. 15 th August	VI - e
vii. Jammu & Kashmir	g. Pacific	VII - d
viii. Fire	h. Punjab	VIII - c
ix. Language	i. Kerala	IX - b
x. Ganesh Chaturthi	j. spear	X - a

Q2. Identify the pictures.

		
i. compass	ii. Early human	iii. Gateway of India
		
iv. Shoe House	v. Baku	vi. Gandhi cap
		
vii. Vesthi	viii. Spices	ix. Edwin Aldrin



x. Neil Armstrong

xi. Globe

xii. Ferdinand Magellan

Q3. Answer the following questions and locate them in India political map.

i. Locate two rice producing states.

Bihar and Odisha

ii. Locate the two wheat producing state

Punjab and Haryana

iii. Which state is known as land of spices.

Kerala and Karnataka

iv. In which state jowar, bajra and wheat are popular.

Rajasthan

v. Which place is popular for oranges?

Nagpur in Maharashtra

vi. Which place is popular for variety of mangoes?

Uttar Pradesh

vii. Which place is popular for variety of apples?

Jammu and Kashmir

viii. In which state ghaghra –kurta odhini is popular dress for women?

Haryana

ix. In which state chaniya – choli is popular dress for women?

Gujarat

x. In which state salwar kameez is popular dress for women?

Punjab

INDIA

Political

