



# SHREE VASISHTHA VIDHYALAYA

## Social Studies Worksheet 2025-26

Name: \_\_\_\_\_

Std. III - \_\_\_\_\_

Roll No. \_\_\_\_\_

Worksheet No: - PA1-02

Date: - \_\_\_\_\_

### Conceptual understanding

#### Q-1 Tick the correct answer.

- 1) The \_\_\_\_\_ is the head of the state government.  
a) Chief Minister                      b) President                      c) Prime Minister
- 2) India is the \_\_\_\_\_ largest country in the world.  
a) seventh                      b) eighth                      c) tenth
- 3) Water has definite \_\_\_\_\_.  
a) Volume                      b) Shape                      c) Length
- 4) \_\_\_\_\_ is the main source of water on the Earth.  
a) River                      b) Sea                      c) Rain
- 5) How many island groups are there in India?  
a) Two                      b) Five                      c) Three

#### Q-2 Fill in the blanks with the help of the given brackets.

[crops, Three-fourth, eight, Desert, three]

- 1) Water covers nearly \_\_\_\_\_ of the Earth.
- 2) The Deccan Plateau is surrounded by hills on its \_\_\_\_\_ sides.
- 3) \_\_\_\_\_ is a hot and dry region.
- 4) Farmers need water to grow \_\_\_\_\_.
- 5) India has \_\_\_\_\_ union territories.

#### Q-3 Write 'T' for True and 'F' for False.

- 1) Water reaches our homes through taps. \_\_\_\_\_
- 2) During summer season, the ice melts on the mountains. \_\_\_\_\_
- 3) Rajasthan is the smallest state of India. \_\_\_\_\_
- 4) Bangalore is the capital of Tamil Nadu. \_\_\_\_\_
- 5) Rainwater harvesting is a method to save water. \_\_\_\_\_

#### Q-4 Answer in one word.

- 1) I am the biggest water body on the Earth. \_\_\_\_\_
- 2) I take the shape of the container. \_\_\_\_\_
- 3) Process of collecting rainwater. \_\_\_\_\_
- 4) Main cause of water shortage. \_\_\_\_\_
- 5) The process for cleaning water. \_\_\_\_\_

**Q-5 Match the following.**

**A**

- 1) Rajasthan
- 2) Ground water
- 3) Rivers, lakes and ponds
- 4) Water Pollution
- 5) West Bengal

**B**

- a) Harmful chemicals in water bodies
- b) Kolkata
- c) Jaipur
- d) Underground water
- e) Sources of fresh water

**Ans.**

- 1- \_\_\_\_\_
- 2- \_\_\_\_\_
- 3- \_\_\_\_\_
- 4- \_\_\_\_\_
- 5- \_\_\_\_\_


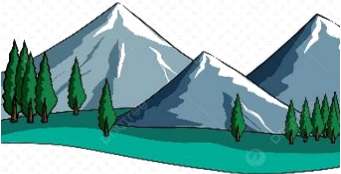




**Q-6 Define.**

- 1) **State:** - \_\_\_\_\_  
\_\_\_\_\_
- 2) **Conserve:** \_\_\_\_\_  
\_\_\_\_\_
- 3) **Reservoir:** - \_\_\_\_\_  
\_\_\_\_\_

**Section B: MAP AND ACTIVITY**

**Q-1 Identify the pictures and write their names.**

[Desert, Island, Mountain, Handpump, well, Swimming]

- |  |   |  |
|--|---|--|
| 1)  | 2)   | 3)  |
| _____  | _____   | _____  |
| 4)  | 5)  | 6)  |
| _____  | _____   | _____  |

**Q-2 Unscramble these words:**

- |                          |                            |
|--------------------------|----------------------------|
| 1) E T D E R S - _____   | 4) T H P O Y D I - _____   |
| 2) T U A P E A L - _____ | 5) A C L O E H R - _____   |
| 3) S L I N D A - _____   | 6) T U E S N L I S - _____ |

**Q-3 On the map of India label the following states.**

**[Tamil Nadu, Rajasthan, Maharashtra, Karnataka, Kerala,  
Jammu & Kashmir, Uttar Pradesh, Assam, Andhra Pradesh,  
West Bengal, Gujarat, Madhya Pradesh ]**



## Practice map

[Tamil Nadu, Rajasthan, Maharashtra, Karnataka, Kerala,  
Jammu & Kashmir, Uttar Pradesh, Assam, Andhra Pradesh,  
West Bengal, Gujarat, Madhya Pradesh ]

