



SHREE VASISHTHA VIDHYALAYA

Social Studies Worksheet 2025-26



Name : - _____

Std.:- IV - _____

Roll No :- _____ Worksheet – PA-1

Date : - _____

(Ch-5 The Great Indian Desert, Ch-8 The Climate of India)

Q-1) Tick the correct answer.

- 1) Thar desert is also known as _____.
a) Islands b) Cold desert c) The Great Indian desert
- 2) The desert region remains _____ throughout the year.
a) Hot and Dry b) Cold c) Cold and Dry
- 3) Many devotees visit the Dargah of Moinuddin Chishti at _____.
a) Jodhpur b) Jaipur c) Ajmer
- 4) Which of the following is not found in the desert?
a) Babul b) date Palm c) Pine
- 5) The summer season begins by _____.
a) October b) June c) April
- 6) In coastal Tamil Nadu rainy season is between _____.
a) June and October b) November and July c) August and December

Q-2) Fill in the blanks:

- 1) Jaipur, the capital of Rajasthan is also called the _____.
- 2) Shrubs and _____ plants are found in abundance in the Thar desert.
- 3) The Thar desert is located to the east of the _____.
- 4) The Indira Gandhi canal provides irrigation in the states of _____, Punjab and Haryana.
- 5) India gets most of its rainfall during the _____ season.
- 6) Many people visit _____ to escape from the unbearable heat of the summer season.

Q-3) True or False:

- 1) Ladakh is a cold desert. _____
- 2) Great Indian desert covers a large part of Uttar Pradesh. _____
- 3) Due to lack of rainfall, there is very little water in desert. _____
- 4) The winter season begins from mid- March. _____
- 5) During monsoon, winds blow from land towards sea. _____
- 6) The average annual rainfall is about 120 cm in our country. _____

Q-4) Give two examples of each:

- | | |
|--|---------------------|
| 1) Festivals of Rajasthan | 1) _____ , 2) _____ |
| 2) Famous tourists attraction in Rajasthan | 1) _____ , 2) _____ |
| 3) Main languages of Rajasthan | 1) _____ , 2) _____ |
| 4) Short-duration seasons of India | 1) _____ , 2) _____ |
| 5) Hill stations of India | 1) _____ , 2) _____ |

Q-5) Rejuggle the following:

- 1) ICTLEAM _____ 2) SERTDE _____
 2) NLAACS _____ 4) RNRIIAGIOT _____

Q-6) Classify the following:







[December, May, Water melons, Mango, longer nights, longer days, loo, fog]

Winter Season	Summer Season

[Temperature of air, Altitude, Distance from the sea, Precipitation, remain constant, Inconsistent]

Climate	Weather

Q-7) Identify the following pictures

1) 	2) 	3) 
4) 	5) 	6) 

Q-8) Picture Talk:

A) a) Identify the season of this picture.

b) Which season comes after this season?

c) What type of clothes do we wear in this season?

B) a) Identify the state shown in the picture.

b) What is the capital of this state?

c) Write two of its neighbouring states.

