



# SHREE VASISHTHA VIDHYALAYA

Maths Worksheet 2025-26

Name: \_\_\_\_\_

Std. II - \_\_\_\_\_

Roll No. \_\_\_\_\_

Worksheet No: - PA2-06

Date: - \_\_\_\_\_

## Conceptual understanding

### Q-1 Fill in the blanks.

- 1) We use money to pay for things that we buy.
- 2) Data handling means sorting and grouping the objects.
- 3)  $\text{₹}20 + \text{₹}10 + \text{₹}15 = \text{₹}45$
- 4) Two ten-rupee coin make ₹ 20
- 5) 4 two-rupee coin makes ₹ 8.
- 6) We keep our money safely in bank
- 7) Currency used in India is rupee
- 8) Write in figures- Two hundred thirty rupees and sixty-seven paise ₹ 230.67
- 9) Write in words ₹ 248.30 Two hundred forty eight rupees and thirty paise
- 10) There are 100 paise in 1 rupee.

### Q-2 Add and write the amount.

1)



₹360

2)



₹750



Q-3 Solve the following.

1) 
$$\begin{array}{r} \text{₹} \\ \textcircled{1} \textcircled{0} \\ 165 \\ + 239 \\ \hline 404 \end{array}$$

2) 
$$\begin{array}{r} \text{₹} \\ 879 \\ - 143 \\ \hline 736 \end{array}$$

3) 
$$\begin{array}{r} \text{₹} \quad \text{p.} \\ \textcircled{1} \\ 275 \quad 75 \\ + 331 \quad 20 \\ \hline 606 \cdot 95 \end{array}$$

4) 
$$\begin{array}{r} \text{₹} \quad \text{p.} \\ 345 \quad 50 \\ - 123 \quad 20 \\ \hline 222 \cdot 30 \end{array}$$

Q-4 Write in figures.

1) Eight rupees and thirty-two paise.

₹ 8.32

2) Thirty-five rupees six paise.

₹ 35.06

3) Sixty-eight rupees forty-two paise.

₹ 68.42

Q-5 Write in words.








1) ₹ 236.42 = Two hundred thirty six rupees and forty two paise








2) ₹ 53.25 = Fifty three rupees and twenty five paise








3) ₹ 48.29 = Forty eight rupees and twenty nine paise








Mental Ability

Q-1 Tick the coins that you need to make the amount equal to the currency notes.


1)  =      

2)  =      

3)  =      

4)  =      

Q-2 Answer the questions about the picture graph.  
Favourite sports of grade-2 (Hint --- 1 object = 1 kid)



1) Write how many kids like each sport.



6



4



2



7

2) In which game students participate more?

Basket ball

3) In which game there are least number of participants?

Rugby