

**VASISHTHA GENESIS SCHOOL, BARDOLI**

(Academic Session: 2025-26)

Date: - \_\_\_\_\_

Class: - 2

Div: A/B/C

Subject: - Math

Name: - \_\_\_\_\_

Revision Worksheet

**Q1. Write the number names for the following numeral:**

i. 182 - \_\_\_\_\_

ii. 377 - \_\_\_\_\_

iii. 689 - \_\_\_\_\_

iv. 258 - \_\_\_\_\_

v. 506 - \_\_\_\_\_

**Q2. Compare the following numbers by filling in the appropriate sign  $<$ ,  $>$  or  $=$  in the given blank:**

i. 56 \_\_\_\_\_ 99

iv. 678 \_\_\_\_\_ 999

vii. 990 \_\_\_\_\_ 990

ii. 272 \_\_\_\_\_ 183

v. 989 \_\_\_\_\_ 989

viii. 687 \_\_\_\_\_ 555

iii. 220 \_\_\_\_\_ 410

vi. 123 \_\_\_\_\_ 286

ix. 345 \_\_\_\_\_ 987

**Q3. Arrange the given numbers in ascending and descending orders:**

i. 987, 654, 387, 325, 876

Ascending order - \_\_\_\_\_

Descending order - \_\_\_\_\_

ii. 126, 965, 111, 877, 986

Ascending order - \_\_\_\_\_

Descending order - \_\_\_\_\_

iii. 320, 820, 520, 920, 324

Ascending order - \_\_\_\_\_

Descending order - \_\_\_\_\_

iv. 659, 987, 756, 884, 450

Ascending order - \_\_\_\_\_

Descending order - \_\_\_\_\_

iv.

|     |   |   |
|-----|---|---|
| H   | T | O |
| 208 |   |   |

|     |   |   |
|-----|---|---|
| H   | T | O |
| 777 |   |   |

|     |   |   |
|-----|---|---|
| H   | T | O |
| 245 |   |   |

|     |   |   |
|-----|---|---|
| H   | T | O |
| 364 |   |   |

**Q5 Add the following sums:**


|      |   |   |   |
|------|---|---|---|
| i)   | H | T | O |
|      |   |   |   |
|      |   | 3 | 4 |
|      |   | 2 | 6 |
| +    |   | 1 | 5 |
|      |   |   |   |
|      |   |   |   |
| iv)  | H | T | O |
|      |   |   |   |
|      |   | 3 | 6 |
|      |   | 3 | 3 |
| +    |   | 2 | 2 |
|      |   |   |   |
|      |   |   |   |
| vii) | H | T | O |
|      |   |   |   |
|      |   | 3 | 4 |
|      |   | 3 | 8 |
| +    |   | 1 | 3 |
|      |   |   |   |
|      |   |   |   |
| ii)  | H | T | O |
|      |   |   |   |
|      |   | 3 | 2 |
|      |   | 4 | 3 |
| +    |   | 1 | 6 |
|      |   |   |   |
|      |   |   |   |
| v)   | H | T | O |
|      |   |   |   |
|      |   | 2 | 9 |
|      |   | 1 | 2 |
| +    |   | 3 | 3 |
|      |   |   |   |
|      |   |   |   |
| iii) | H | T | O |
|      |   |   |   |
|      |   |   |   |
|      |   | 2 | 3 |
|      |   | 2 | 7 |
| +    |   | 3 | 5 |
|      |   |   |   |
|      |   |   |   |
| vi)  | H | T | O |
|      |   |   |   |
|      |   |   |   |
|      |   | 4 | 6 |
|      |   | 3 | 7 |
| +    |   | 1 | 4 |
|      |   |   |   |
|      |   |   |   |
| ix)  | H | T | O |
|      |   |   |   |
|      |   |   |   |
|      |   | 2 | 4 |
|      |   | 1 | 5 |
| +    |   | 5 | 3 |
|      |   |   |   |
|      |   |   |   |

**Q6 Solve the following:**


i) In a book store, 25 story books are there in one book stand and 35 G.K books in another book stand. How many books are there in both the stands?




ii) On one Monday, Harish delivered 47 newspapers in the Morning and 26 newspapers in the Evening. How many newspaper did he deliver in all on that Monday?



iii) Ramola gained 30 points when she shopped online. Her sister shopped at the store and gained 25 points without shopping. How many points did they gain altogether?



iv) Shanti painted 32 mud toys. Reena Painted 10 more mud toys than Shanti. How many toys were painted by both of them?



v) Piyush blew 32 balloons, Rita blew 12 balloons and Arit blew 36 balloons. How many balloons are blown in all?

