

VASISHTHA GENESIS SCHOOL, BARDOLI

(Academic Session: 2025-26)

Date: - _____ Class: - 2 Div: A/B/C Roll No: _____ Subject: - Maths
 Name: - Answer Key Revision Worksheet No: - 1 PT-2

Q1. Fill in the blanks:

- i. Which day comes after Monday? Tuesday
- ii. If yesterday was Sunday today is? Monday
- iii. Which day comes between Friday and Sunday Saturday
- iv. Which month comes between June and August? July
- v. Which month comes after April? May
- vi. Which is the fourth month of the year? April

Q2. Write the division facts:

a) $25 \div 5 =$	<u>5</u>	b) $18 \div 2 =$	<u>9</u>
c) $63 \div 9 =$	<u>7</u>	d) $16 \div 4 =$	<u>4</u>
e) $45 \div 9 =$	<u>5</u>	f) $72 \div 9 =$	<u>8</u>
g) $48 \div 6 =$	<u>8</u>	h) $35 \div 7 =$	<u>5</u>

Q3. Divide to find the remainder and quotient:

a) $\begin{array}{r} 7 \\ 6 \overline{) 45} \\ \underline{-42} \\ 03 \end{array}$	b) $\begin{array}{r} 9 \\ 8 \overline{) 76} \\ \underline{-72} \\ 04 \end{array}$	c) $\begin{array}{r} 9 \\ 9 \overline{) 83} \\ \underline{-81} \\ 02 \end{array}$	d) $\begin{array}{r} 9 \\ 4 \overline{) 38} \\ \underline{-36} \\ 02 \end{array}$
Quotient: <u>7</u>	Quotient: <u>9</u>	Quotient: <u>9</u>	Quotient: <u>9</u>
Remainder: <u>3</u>	Remainder: <u>4</u>	Remainder: <u>2</u>	Remainder: <u>2</u>

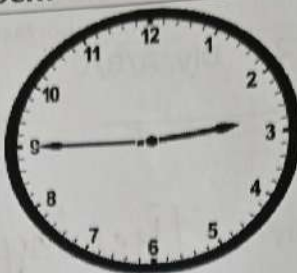
Q4. Write the time shown in the clock:

A)



3:00

B)



2:45

C)



4:15

D)



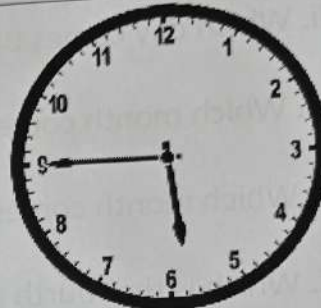
6:30

E)



9:00

F)



5:45

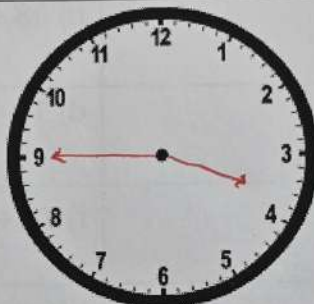
Q2 Draw the hands of clock.

A



2:30

B



3:45

C



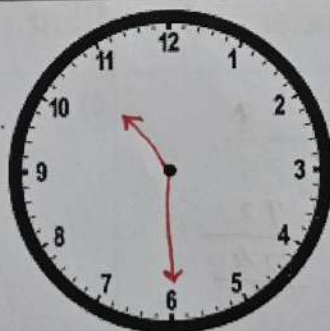
4:00

D



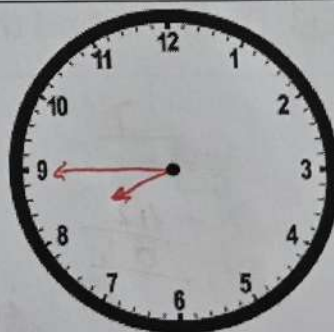
12:15

E



10:30

F



8:45

Q6 Solve the word problems:

- i) A man packed 72 candies in 8 packets. How many candies did he pack in each packet, if each packet has equal number of candies?

$$\begin{array}{r} 9 \\ 8 \overline{) 72} \\ \underline{- 72} \\ 00 \end{array}$$

Q \rightarrow 9
R \rightarrow 0

- ii) A monkey family shared 32 bananas among themselves. Each got 4 bananas. How many members are there in the monkey's family?

$$\begin{array}{r} 8 \\ 4 \overline{) 32} \\ \underline{- 32} \\ 00 \end{array}$$

Q \rightarrow 8
R \rightarrow 0

- iii) There are 56 students in the school choir. If they need to form groups of 8 for a performance how many group will be there?

$$\begin{array}{r} 7 \\ 8 \overline{) 56} \\ \underline{- 56} \\ 00 \end{array}$$

Q \rightarrow 7
R \rightarrow 0

- iv) Atul has to go for drawing class at 5:00. He reaches the class 15 minutes late. By what time did he reach the class.

$$5:15$$

- v) Naina placed a cake order for cake at 4:00. She gets it delivered after half an hour. At what time does she get the cake?

$$4:30$$

- vi) Today is Monday. My birthday is on Saturday. How many days are left until my birthday?

$$5 \text{ days}$$

- vii) I stayed in Italy for four weeks. How many days did I stay there?

$$7 \times 4 = 28 \text{ days}$$