

VASISHTHA GENESIS SCHOOL, BARDOLI
(Academic Session: 2025-26)

Date: _____ **Class: 1** **Div: A/B/C** **Roll No:** _____ **Sub: Maths**
Name: _____ **Revision w.s-1 (PT-2)**

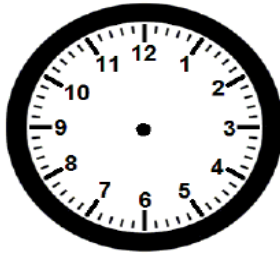
Q1. Fill in the blanks:

- i. We use money in the form of _____ and _____.
- ii. First month of the year is _____.
- iii. The sign of rupees is _____.
- iv. 50 rupees is written as _____.
- v. 75 paise is written as _____.
- vi. 100 rupees is written as _____.
- vii. The last month of the year is _____.
- viii. There are _____ days in a week .
- ix. The _____ is used to tell correct time.
- x. _____ is the first day of the week.
- xi. The _____ hands tells the hours and the _____ hands tells the minutes.
- xii. _____ is the day between Saturday and Monday.
- xiii. The hour hand is _____ than the minute hand in clock.
- xiv. The last day of the week is _____ .

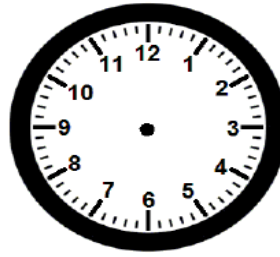
Q2. Write the number names of the given figure:

- i. 351 = _____
- ii. 460 = _____
- iii. 500 = _____
- iv. 389 = _____
- v. 475 = _____
- vi. 338 = _____
- vii. 494 = _____
- viii. 366 = _____
- ix. 458 = _____


Q3. Draw both the hands in the clocks to show the given time:



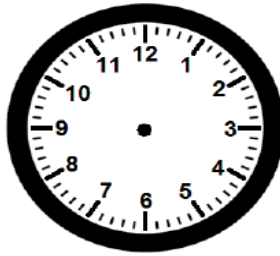
6:00




2:00




7:00



1:00



8:00



10:00

Q4. Read the value of each coin/note written on it and write it below each coin/note:















