

VASISHTHA GENESIS SCHOOL, BARDOLI

(Academic Session: 2025-26)

Date: - _____

Class: - 2

Div: A/B/C

Subject: - S.S

Name: - _____

Revision Worksheet No: - 3


PT- 2

Q6 Identify the picture and name them:

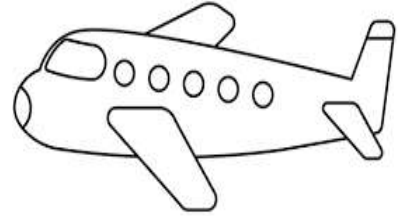
a)



b)



c)




d)



e)




f)



g)



h)




i)



j)



k)



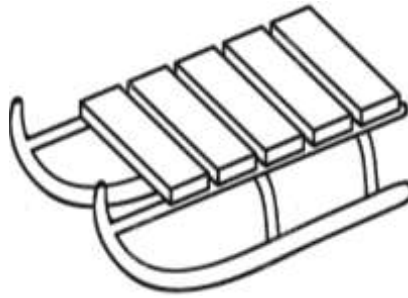
l)



m)



n)



o)



Q7 Match the following columns:

Ch- 12 Means of transport

Columns 'A'	Answer	Columns 'B'
i. Helicopter	i-_____	a) hooves
ii. Car	ii-_____	b) water transport
iii. Boat	iii-_____	c) air transport
iv. Camel	iv-_____	d) land transport

Ch- 14 Finding Our Way

Columns 'A'	Answer	Columns 'B'
i. Directions	i-_____	a) east
ii. North	ii-_____	b) compass
iii. Right	iii-_____	c) direction
iv. Sun rises	iv-_____	d) Side

Ch- 15 The Story of the Wheel

Columns 'A'	Answer	Columns 'B'
i. Pots	i-_____	a) Round log of wood
ii. First Wheel	ii-_____	b) Thousands of year ago
iii. Car	iii-_____	c) potters wheel
iv. Wheel invented	iv-_____	d) modern means of transport