

VASISHTHA GENESIS SCHOOL, BARDOLI

(Academic Session: 2025-26)

Date: - _____ Class: - 2 Div: A/B/C Roll No: _____ Subject: - Maths

Name: - _____ Worksheet No: - 10 PT-2

Ch-10 Time

Q1 Look at the clock and tell the time.

A)



B)



C)



D)



E)




F)




Q2 Draw the hands of clock.

A




12:30

B




7:45

C



3:15

D




1:00

E



11:30

F



6:45

Q3 Solve the word problem.

i. The School declared 2 days of holiday from Monday onwards.
On which day will the school reopen?

ii. I stayed in Singapore for two weeks. How many days did I stay there?

iii. Mridul did not come to school from Monday to Thursday.
How many days did he remain absent from the school?

iv. Today is Friday. My birthday is on Tuesday. How many days are left until my birthday?

v. Manjusha does fitness yoga every day for 1 hour. For how many hour does she do yoga in a week?

vi. Ms. Desai sat down to eat pizza at 9:00. She finished eating her pizza in 45 minutes. At what time did she finish her pizza?

vii. Tara waited for the train to arrive at 6:00 clock. The train was delayed by 30 minutes. What time did the train finally arrive?

viii. Carrie started making a sand castle at 12:00 in the afternoon.
She finished making it 45 minutes. By what time did she finish making her castle?

xi. Joyes started painting the drawing by 6 0' clock he finished the painting in 45 minutes. By what time did he finish painting?

x. Disha's class was scheduled at 8:00. Disha reached the class 15 minutes after. At what time did she reach the class?

Q4 Fill in the blanks.

- i. Which day comes after Friday? _____
- ii. If yesterday was Wednesday today is? _____
- iii. Which day comes between Thursday and Saturday _____
- iv. Which day comes before Tuesday? _____
- v. On which day do you have holiday? _____
- vi. Which is the fourth month of the year? _____
- vii. Which month comes between September and November? _____
- viii. In which month do we celebrate Christmas? _____
- ix. Which is the shortest month of the year? _____
- x. How many days are there in a year? _____
- xi. How many days are there in a week? _____