

VASISHTHA GENESIS SCHOOL, BARDOLI

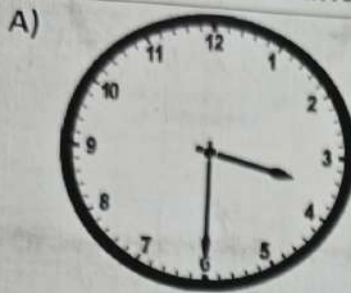
(Academic Session: 2025-26)

Date: - \_\_\_\_\_ Class: - 2 Div: A/B/C Roll No: \_\_\_\_\_ Subject: - Maths

Name: - *Answers Key* Worksheet No: - 10 PT-2

Ch-10 Time

Q1 Look at the clock and tell the time.



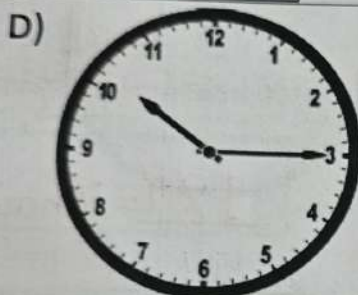
3:30




4:45




5:00



10:15




9:30

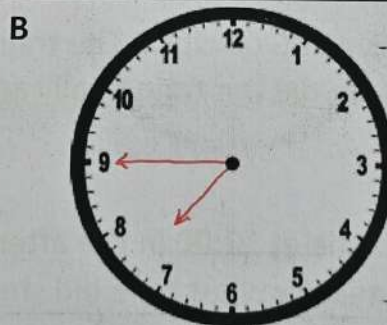


4:00

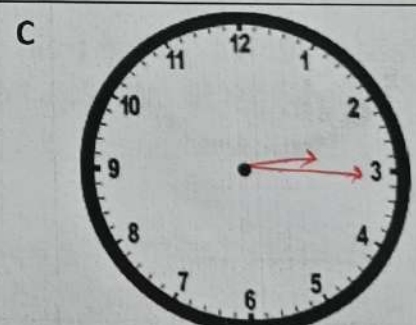
Q2 Draw the hands of clock.



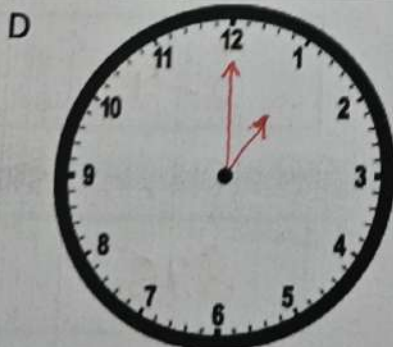
12:30



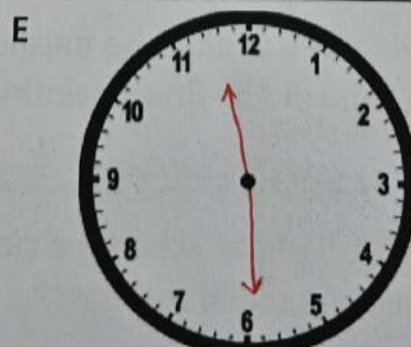
7:45



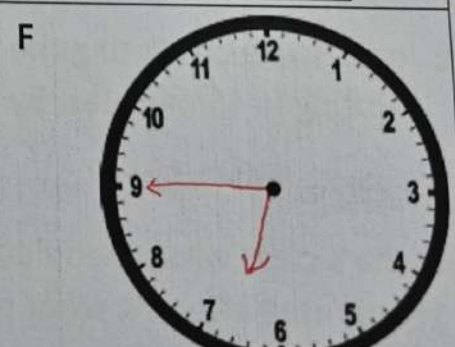
3:15



1:00



11:30



6:45



**Q3 Solve the word problem.**

- i. The School declared 2 days of holiday from Monday onwards. On which day will the school reopen?
- ii. I stayed in Singapore for two weeks. How many days did I stay there?
- iii. Mridul did not come to school from Monday to Thursday. How many days did he remain absent from the school?
- iv. Today is Friday. My birthday is on Tuesday. How many days are left until my birthday?
- v. Manjusha does fitness yoga every day for 1 hour. For how many hour does she do yoga in a week?
- vi. Ms. Desai sat down to eat pizza at 9:00. She finished eating her pizza in 45 minutes. At what time did she finish her pizza?
- vii. Tara waited for the train to arrive at 6:00 clock. The train was delayed by 30 minutes. What time did the train finally arrive?
- viii. Carrie started making a sand castle at 12:00 in the afternoon. She finished making it 45 minutes. By what time did she finish making her castle?
- xi. Joyes started painting the drawing by 6 O' clock he finished the painting in 45 minutes. By what time did he finish painting?
- x. Disha's class was scheduled at 8:00. Disha reached the class 15 minutes after. At what time did she reach the class?

Wednesday

1 week = 7 days

$2 \times 7 = 14$  days

4 days

4 days

$1 \times 7 = 7$  hours

9:45

6:30

12:45

6:45

8:15

Q4 Fill in the blanks.

- i. Which day comes after Friday? Saturday
- ii. If yesterday was Wednesday today is? Thursday
- iii. Which day comes between Thursday and Saturday Friday
- iv. Which day comes before Tuesday? Monday
- v. On which day do you have holiday? Sunday
- vi. Which is the fourth month of the year? April
- vii. Which month comes between September and November? October
- viii. In which month do we celebrate Christmas? December
- ix. Which is the shortest month of the year? February
- x. How many days are there in a year? 365
- xi. How many days are there in a week? 7 days