

VASISHTHA GENESIS SCHOOL, BARDOLI

(Academic Session: 2025-26)

Date: - _____ Class: - 2 Div: A/B/C Roll No: _____ Subject: - Maths
Name: - _____ Revision Worksheet No: - 1 PT-2

Q1. Fill in the blanks:

- i. Which day comes after Monday? _____
- ii. If yesterday was Sunday today is? _____
- iii. Which day comes between Friday and Sunday _____
- iv. Which month comes between June and August? _____
- v. Which month comes after April? _____
- vi. Which is the fourth month of the year? _____

Q2. Write the division facts:

a) $25 \div 5 =$ <input type="text"/>	b) $18 \div 2 =$ <input type="text"/>
c) $63 \div 9 =$ <input type="text"/>	d) $16 \div 4 =$ <input type="text"/>
e) $45 \div 9 =$ <input type="text"/>	f) $72 \div 9 =$ <input type="text"/>
g) $48 \div 6 =$ <input type="text"/>	h) $35 \div 7 =$ <input type="text"/>

Q3. Divide to find the remainder and quotient:

a) $\begin{array}{r} 6 \overline{) 45} \end{array}$ Quotient: _____ Remainder: _____	b) $\begin{array}{r} 8 \overline{) 76} \end{array}$ Quotient: _____ Remainder: _____	c) $\begin{array}{r} 9 \overline{) 83} \end{array}$ Quotient: _____ Remainder: _____	d) $\begin{array}{r} 4 \overline{) 38} \end{array}$ Quotient: _____ Remainder: _____
---	---	---	---

Q4. Write the time shown in the clock:

A)



B)



C)



D)



E)




F)




Q2 Draw the hands of clock.

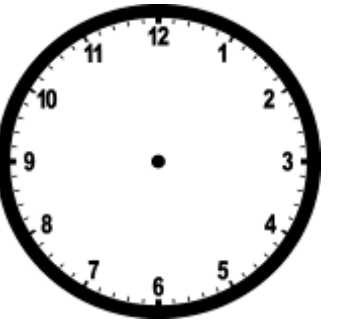
A




B




C




D



E



F



Q6 Solve the word problems:

i) A man packed 72 candies in 8 packets. How many candies did he pack in each packet, if each packet has equal number of candies?

ii) A monkey family shared 32 bananas among themselves. Each got 4 bananas. How many members are there in the monkey's family?

iii) There are 56 students in the school choir. If they need to form groups of 8 for a performance how many group will be there?

iv) Atul has to go for drawing class at 5:00. He reaches the class 15 minutes late. By what time did he reach the class.

v) Naina placed a cake order for cake at 4:00. She gets it delivered after half an hour. At what time does she get the cake?

vi) Today is Monday. My birthday is on Saturday. How many days are left until my birthday?

vii) I stayed in Italy for four weeks. How many days did I stay there?