

**VASISHTHA GENESIS SCHOOL, BARDOLI**

(Academic Session: 2025-26)

Date: - \_\_\_\_\_

Class: - 2

Div: A/B/C

Subject: - S.S

Name: - \_\_\_\_\_

Revision Worksheet No: - 3

PT- 2

**Q6 Identify the picture and name them:**

a)



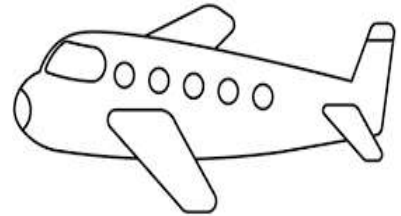
Car

b)



Bus

c)



Aeroplane

d)




Helicopter

e)




Boat

f)



Horse cart

g)



Steamer

h)



Train

i)



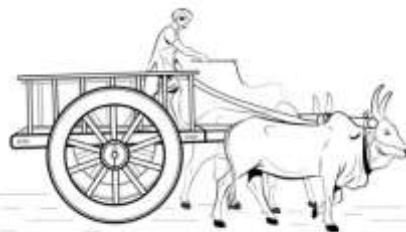
Rocket

j)



Motorcycle

k)



Bullock cart

l)



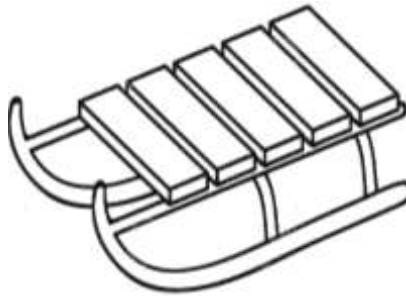
Truck

m)



Compass

n)



Sledge

o)



Potter's Wheel

**Q7 Match the following columns:**

**Ch- 12 Means of transport**

Columns 'A'	Answer	Columns 'B'
i. Helicopter	i- <u>c</u>	a) hooves
ii. Car	ii- <u>d</u>	b) water transport
iii. Boat	iii- <u>b</u>	c) air transport
iv. Camel	iv- <u>a</u>	d) land transport

**Ch- 14 Finding Our Way**

Columns 'A'	Answer	Columns 'B'
i. Directions	i- <u>b</u>	a) east
ii. North	ii- <u>c</u>	b) compass
iii. Right	iii- <u>d</u>	c) direction
iv. Sun rises	iv- <u>a</u>	d) Side

**Ch- 15 The Story of the Wheel**

Columns 'A'	Answer	Columns 'B'
i. Pots	i- <u>c</u>	a) Round log of wood
ii. First Wheel	ii- <u>a</u>	b) Thousands of year ago
iii. Car	iii- <u>d</u>	c) potters wheel
iv. Wheel invented	iv- <u>b</u>	d) modern means of transport