

**VASISHTHA GENESIS SCHOOL, BARDOLI**  
**(Academic Session: 2024-25)**

**Date:** \_\_\_\_\_ **Class:** 1 **Div:** A/B/C **Roll No:** \_\_\_\_\_ **Sub:** Maths  
**Name:** \_\_\_\_\_ **Worksheet:** 4 (PT-2)

**Ch-10 Measurement - TIME**

**Q1. Fill in the blanks:**










- i. A week has \_\_\_\_\_ days .
- ii. The \_\_\_\_\_ is used to tell correct time.
- iii. \_\_\_\_\_ is the first day of the week.
- iv. The \_\_\_\_\_ hands tells the hours and the \_\_\_\_\_ hands tells the minutes.
- v. \_\_\_\_\_ is the day between Saturday and Monday.
- vi. The hour hand is \_\_\_\_\_ than the minute hand in clock.
- vii. The last day of the week is \_\_\_\_\_ .
- viii. First month of the year is \_\_\_\_\_.
- ix. Second month of the year is \_\_\_\_\_ .

**Q2. Fill in the correct part of a day in the blanks from the “word box”:**










- i. My school bus picks me up in the \_\_\_\_\_ .
- ii. I eat my lunch in the \_\_\_\_\_ .
- iii. I play with my friends in the \_\_\_\_\_.
- iv. I go to bed at \_\_\_\_\_.
- v. The sun appears in the sky from \_\_\_\_\_ to \_\_\_\_\_.
- vi. The stars and the moon appear in the sky at \_\_\_\_\_ .
- viii. I get up at 6’ oclock in the \_\_\_\_\_.
- ix. The sun shines brightly in the sky at \_\_\_\_\_ .

Word Box
morning afternoon evening night

Q3. Read the time and write it in the blank below each clock:

 <b>10:00</b>	 :	 :
 :	 :	 :
 :	 :	 :

Q4. Draw both the hands in the clocks to show the given time:

 <b>6:00</b>	 <b>2:00</b>	 <b>7:00</b>
 <b>1:00</b>	 <b>8:00</b>	 <b>10:00</b>
 <b>3:00</b>	 <b>5:00</b>	 <b>4:00</b>