

VASISHTHA GENESIS SCHOOL, BARDOLI
(Academic Session: 2024-25)

Date: _____ Class: 1 Div: A/B/C Roll No: _____ Sub: Maths
Name: _____ Worksheet: 4 (PT-2) (Answer)

Ch-10 Measurement - TIME

Q1. Fill in the blanks:

- i. There are Seven days in a week .
- ii. The clock is used to tell correct time.
- iii. Monday is the first day of the week.
- iv. The short hands tells the hours and the long hands tells the minutes.
- v. Sunday is the day between Saturday and Monday.
- vi. The hour hand is shorter than the minute hand in clock.
- vii. The last day of the week is Sunday .

Q2. Fill in the correct part of a day in the blanks from the "word box":

- i. My school bus picks me up in the morning .
- ii. I eat my lunch in the afternoon .
- iii. I play with my friends in the evening .
- iv. I go to bed at night .
- v. The sun appears in the sky from morning to evening .
- vi. The moon appears in the sky at night .

Word Box

morning
afternoon
evening
night

Q3. Read the time and write it in the blank below each clock:



10:00



3:00



6:00




8:00




2:00



10:00



9:00



7:00



2:00

Q4. Draw both the hands in the clocks to show the given time:




6:00



2:00



7:00



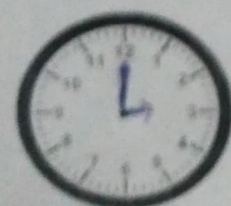
1:00



8:00



10:00



3:00



5:00



4:00