

VASISHTHA GENESIS SCHOOL, BARDOLI
(Academic Session: 2025-26)

Date: - _____ **Class:** - 2 **Div:** A/B/C **Roll no:** _____ **Subject:** - S.S
Name: - _____ **Worksheet No:** - 12 **PT-2**

Ch – 12 Means of Transport

New words

Transport	Muscular	Steamer	Ponies
Invented	Machine	Aeroplane	Hooves
Carriages	Diesel	Rocket	Desert
Vehicles	Passengers	Satellites	Gliders
Rickshaw	Congestions	Mules	Electricity

Q1. Fill in the blanks:

- i. Long ago people went from one place to another on _____.
- ii. A bullock cart, tonga, camel cart are the vehicles pulled by _____.
- iii. We use Petrol, diesel and CNG as _____.
- iv. _____ is a slow means of transport.
- v. A bicycle and cycle rickshaw are pulled by the _____ energy.

Q2. State whether the following statements are 'True 'or 'False ':

- i. Metro trains help to reduce the traffic congestion to a great extent. _____
- ii. Aeroplane is the slowest means of transport. _____
- iii. Mules are used in hills for travelling. _____
- iv. Boat and ship are Air transport. _____
- v. Donkeys are used to carry loads as they are very strong. _____

Q3. Choose the correct option and answer the following questions:

- i. Vehicles can be divided into ____ groups.
(a) three (b) four (c) one (d) two
- ii. ____ is an air transport.
(a) Boat (b) Car (c) Glider (d) Steamer
- iii. In olden days king used to travel on _____.
(a) horse (b) camel (c) mules (d) elephant
- iv. A scooter is ____ transport.
(a) land (b) air (c) water (d) none

Q4. Answer the following Very Short Answer type question:

i. Who is called the ship of the desert?

A. _____

ii. Name any one water transportation.

A. _____

iii. Which animal is used to travel in the thick forest?

A. _____

iv. In which trains do people in big cities travel?

A. _____

Q5. Match the following columns:

Columns 'A'	Answer	Columns 'B'
i. Helicopter	i- _____	a) hooves
ii. Car	ii- _____	b) water transport
iii. Boat	iii- _____	c) air transport
iv. Camel	iv- _____	d) land transport

Q6. Answer the following questions:

i. How did people travel long ago?

Ans _____

ii. Name three means of land transport.

Ans _____

iii. What is the difference between a passenger train and a goods train?

Ans _____

iv. How do bicycle and cycle rickshaws move?

Ans _____

v. Why are camels used as means of transport in the desert area?

Ans _____

Q7 Identify the pictures and name them:


a)



b)



c)




d)




e)




f)



g)



h)



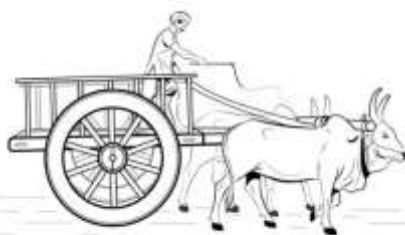
i)



j)



k)



l)