

**VASISHTHA GENESIS SCHOOL, BARDOLI**  
(Academic Session: 2025-26)



Date: \_\_\_\_\_ Class: 1 Div: A/B/C  
Name: \_\_\_\_\_

Roll No: \_\_\_\_\_ Sub: Maths  
Revision w.s-2 (PT-2)




**Q1. Add and write the answer:**







= ₹ \_\_\_\_\_

= ₹ \_\_\_\_\_




= ₹ \_\_\_\_\_




= ₹ \_\_\_\_\_




= ₹ \_\_\_\_\_



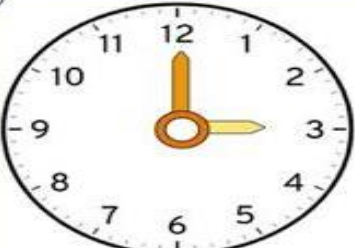






= ₹ \_\_\_\_\_



= ₹ \_\_\_\_\_

**Q2. Read the time and write it in the blank below each clock:**

<div>1</div>  _____	<div>2</div>  _____
<div>3</div>  _____	<div>4</div>  _____
<div>5</div>  _____	<div>6</div>  _____

**Q3. Draw both the hands in the clocks to show the given time:**



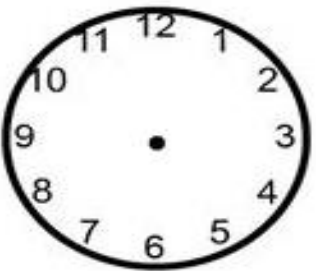
**1:00**



**3:00**



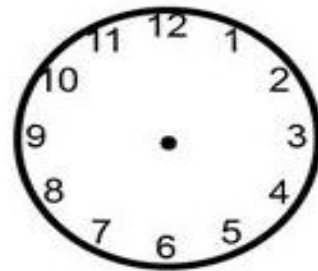
**8:00**



**4:00**



**2:00**



**11:00**