

VASISHTHA GENESIS SCHOOL, BARDOLI
(Academic Session: 2024-25)

Date: _____ **Class:** 1 **Div:** A/B/C **Roll No:** _____ **Sub:** Maths
Name: _____ **Worksheet:** 4 (PT-2)

Ch-10 Measurement - TIME

Q1.Fill in the blanks:



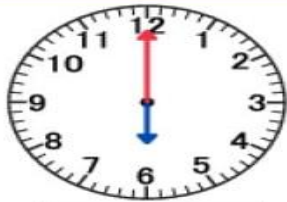






- i. There are _____ days in a week .
- ii. The _____ is used to tell correct time.
- iii. _____ is the first day of the week.
- iv. The _____ hands tells the hours and the _____ hands tells the minutes.
- v. _____ is the day between Saturday and Monday.
- vi. The hour hand is _____ than the minute hand in clock.
- vii. The last day of the week is _____ .

Q2. Fill in the correct part of a day in the blanks from the “word box”:

- i. My school bus picks me up in the _____ .
- ii. I eat my lunch in the _____ .
- iii. I play with my friends in the _____ .
- iv. I go to bed at _____ .
- v. The sun appears in the sky from _____ to _____ .
- vi. The moon appears in the sky at _____ .

Word Box
morning afternoon evening night

Q3. Read the time and write it in the blank below each clock:

 10:00	 :	 :
 :	 :	 :
 :	 :	 :

Q4. Draw both the hands in the clocks to show the given time:

