

VASISHTHA GENESIS SCHOOL, BARDOLI
(Academic Session: 2025-26)

Date: _____ Class: 1 Div: A/B/C Roll No: _____ Sub: Maths
Name: _____ Revision w.s-1 (PT-2)

Q1. Fill in the blanks:

- i. We use money in the form of rupees and paise.
- ii. We use money to buy things.
- iii. The sign of rupees is ₹ .
- iv. 50 rupees is written as ₹ 50.
- v. 75 paise is written as 75 p.
- vi. 100 rupees is written as ₹ 100
- vii. 25 paise is written as 25 p .
- viii. There are Seven days in a week .
- ix. The clock is used to tell correct time.
- x. Monday is the first day of the week.
- xi. The Short hands tells the hours and the long hands tells the minutes.
- xii. Sunday is the day between s and Monday.
- xiii. The hour hand is shorter than the minute hand in clock.
- xiv. The last day of the week is Sunday .


Q2. Write the number names of the given figure:

- i. 351 = Three hundred fifty one
- ii. 460 = Four hundred sixty
- iii. 500 = Five hundred
- iv. 389 = Three hundred eighty nine
- v. 475 = Four hundred seventy five
- vi. 338 = Three hundred thirty eight
- vii. 494 = Four hundred ninety four
- viii. 366 = Three hundred sixty six
- ix. 458 = Four hundred fifty eight


Q3. Draw both the hands in the clocks to show the given time:




6:00



2:00




7:00



1:00




8:00



10:00


Q4. Read the value of each coin/note written on it and write it below each coin/note:



₹ 200



₹ 5



₹ 50




₹ 20



₹ 100



50 p



₹ 10



₹ 1