

VASISHTHA GENESIS SCHOOL, BARDOLI
(Academic Session: 2025-26)

Date: _____ **Class:** 1 **Div:** A/B/C **Roll No:** _____ **Sub:** Maths
Name: _____ **Revision w.s-3 (Term-1) Ans Key**

Revision worksheet

Q1. Word problem:

- i. Rita bought 29 pencils for a drawing competition. 3 pencils were not used. How many pencils were used?

T	O
2	9
-	3
<hr/>	
2	6

Ans : 26 pencils

- ii. A fruit seller had 48 red apples and 31 green apples in the shop. How many total apples are there in the shop ?

T	O
4	8
+ 3	1
<hr/>	
7	9

Ans : 79 apples

- iii. Shyam had 78 erasers. He gave 43 of them to his classmates. How many erasers are left with him ?

T	O
7	8
- 4	3
<hr/>	
3	5

Ans : _____ eraser

- iv. There are 15 cups of mushroom soup and 22 cups of tomatoes soup. How many cups of soup are there ?

T	O
1	5
+ 2	2
<hr/>	
3	7

Ans : 37 cups of soup


- v. There are 33 boys and 12 girls in a classroom. How many children are there altogether in classroom?

T	O
3	3
+ 1	2
<hr/>	
4	5


Ans : 45 childrens

Q2. Identify and write the names of shapes below the objects:


*** PLANE SHAPES**



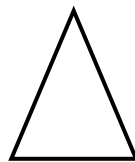
Square




Circle






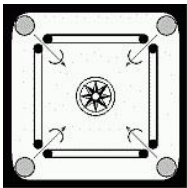




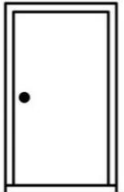

Rectangle



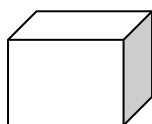
Triangle



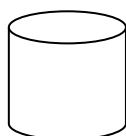
Oval

				
Circle	Rectangle	Oval	Square	Triangle
				
Circle	Oval	Triangle	Rectangle	Square


*** SOLID SHAPES**



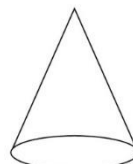
Cube



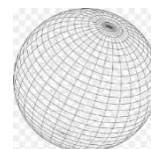
Cylinder




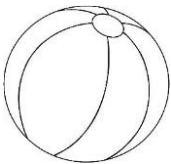





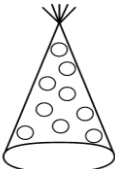

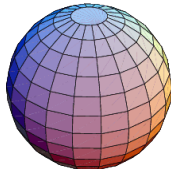
Cuboid



Cone



Sphere

				
Cone	Sphere	Cylinder	Cuboid	Cube
				
Cuboid	Cylinder	Cone	Cube	Sphere