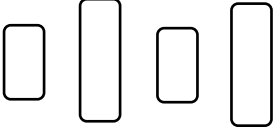


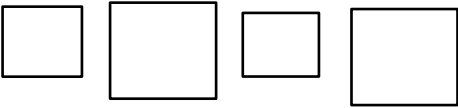
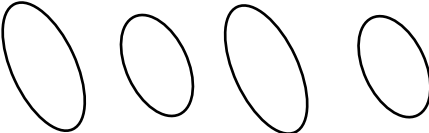


**VASISHTHA GENESIS SCHOOL, BARDOLI**  
(Academic Session: 2025-26)


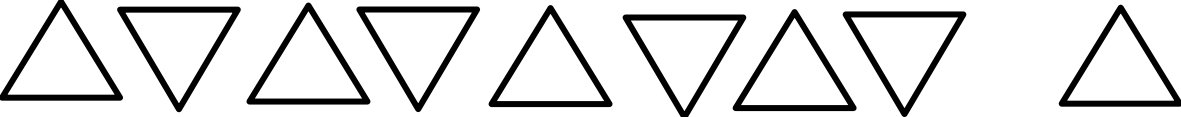


Date: \_\_\_\_\_ Class: 1 Div: A/B/C Roll No: \_\_\_\_\_ Sub: Maths  
Name: \_\_\_\_\_ Worksheet: 3 (Term-1)

**Ch-7 Shapes and patterns**

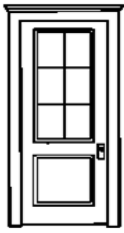



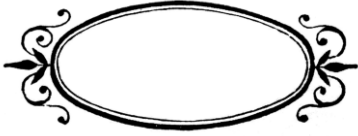




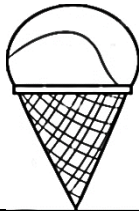


**Q 1. Match each pattern with the correct name of the shape:**

1. 	1 - b	a. Star
2. 	2 - a	b. Rectangle
3. 	3 - e	c. Square
4. 	4 - c	d. Oval
5. 	5 - d	e. Circle








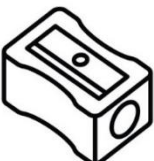

**Q 2. Draw the next shape in each space, and complete each pattern:**

a.	 <span style="display: inline-block; width: 100px; border-bottom: 1px solid black; vertical-align: middle;"></span>
b.	 <span style="display: inline-block; width: 100px; border-bottom: 1px solid black; vertical-align: middle;"></span>
c.	 <span style="display: inline-block; width: 100px; border-bottom: 1px solid black; vertical-align: middle;"></span>
d.	 <span style="display: inline-block; width: 100px; border-bottom: 1px solid black; vertical-align: middle;"></span>

**Q 3. Identify and write the names of given shapes below the objects:**

		
Rectangle	Circle	Square
		
Triangle	Oval	Star
		
Cube	cylinder	Cuboid
		
Cone	Sphere	Cuboid

**Q 4. Tick (✓) the objects that roll and cross (x) the objects that slide:**

 <input checked="" type="checkbox"/>	 <input type="checkbox"/>	 <input checked="" type="checkbox"/>
 <input type="checkbox"/>	 <input checked="" type="checkbox"/>	 <input type="checkbox"/>
 <input checked="" type="checkbox"/>	 <input type="checkbox"/>	 <input checked="" type="checkbox"/>