

VASISHTHA GENESIS SCHOOL, BARDOLI
(Academic Session: 2025-26)

Date: _____ **Class:** 1 **Div:** A/B/C **Roll No:** _____ **Sub:** Maths
Name: _____ **Revision w.s-3 (Term-1)**

Revision worksheet

Q1. Word problem:

- i. Rita bought 29 pencils for a drawing competition. 3 pencils were not used. How many pencils were used?

Ans : _____ pencils

- ii. A fruit seller had 48 red apples and 31 green apples in the shop. How many total apples are there in the shop ?

Ans : _____ apples

- iii. Shyam had 78 erasers. He gave 43 of them to his classmates. How many erasers are left with him ?

Ans : _____ eraser

- iv. There are 15 cups of mushroom soup and 22 cups of tomatoes soup. How many cups of soup are there ?


Ans : _____ cups of soup

- v. There are 33 boys and 12 girls in a classroom. How many children are there altogether in classroom?


Ans : _____ children

Q2. Identify and write the names of shapes below the objects:

*** PLANE SHAPES**



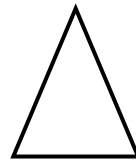
Square



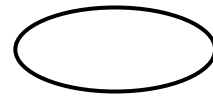
Circle







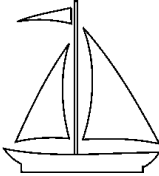





Rectangle



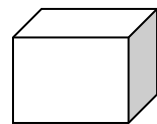
Triangle



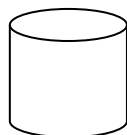
Oval


*** SOLID SHAPES**



Cube



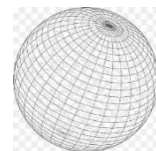
Cylinder



Cuboid



Cone



Spher

