

VASISHTHA GENESIS SCHOOL, BARDOLI
(Academic Session: 2025-26)

Date: _____ Class: 1 Div: A/B/C Roll No: _____ Sub: Maths
Name: _____ Worksheet: 4 (CT-1)

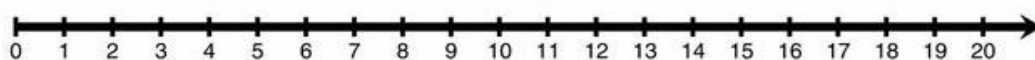
Ch-3 Addition and Sutraction up to 20

Q1. Add on the given number line:

i. $3 + 5 =$



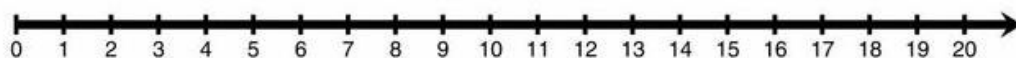
ii. $14 + 5 =$



iii. $5 + 5 =$



iv. $12 + 8 =$



v. $3 + 2 =$



Q2. Add by counting forward:

i. $5 + 3 =$

$5 \rightarrow 6 \rightarrow 7 \rightarrow 8$

ii. $7 + 2 =$

iii. $4 + 5 =$

iv. $6 + 4 =$

v. $6 + 3 =$

vi. $9 + 1 =$

Q3. Add the following:

	Tens	Ones
	1	6
+		3

	Tens	Ones
	1	4
+		4

	Tens	Ones
	1	2
+		2

	Tens	Ones
	1	3
+		2


	Tens	Ones
	1	1
+		6

	Tens	Ones
	1	5
+		1

Q4. Add the given three numbers and find the answer :

$\begin{array}{r} 2 \\ + 1 \\ + 4 \\ \hline \end{array} > \boxed{}$	$\begin{array}{r} 1 \\ + 5 \\ + 3 \\ \hline \end{array} > \boxed{}$	$\begin{array}{r} 6 \\ + 7 \\ + 6 \\ \hline \end{array} > \boxed{}$	$\begin{array}{r} 3 \\ + 2 \\ + 7 \\ \hline \end{array} > \boxed{}$
---	---	---	---

Q5. Draw and strike off the lines to find the answer:

i. 6 - 4 	ii. 8 - 3	iii. 9 - 5
2		

i. 5 - 2	ii. 7 - 4	iii. 3 - 2

Q6. Subtract the following:

	Tens	Ones
	1	7
-		5

	Tens	Ones
	1	6
-		3

	Tens	Ones
	1	4
-		2

	Tens	Ones
	1	9
-		1

	Tens	Ones
	1	8
-		7


	Tens	Ones
	1	9
-		9

Q7. Subtract the following using the given number line:

i. $7 - 6 =$



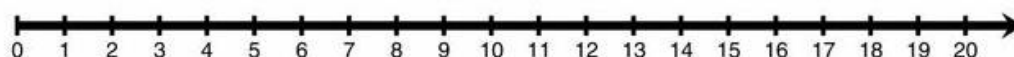
ii. $13 - 7 =$



iii. $9 - 3 =$



iv. $20 - 3 =$



v. $8 - 6 =$



Q9. Start with the bigger number and count backward to subtract the following:

i. 9 - 2 7 ← 8 ← 9 7	ii. 5 - 1 <div style="border: 1px solid black; width: 150px; height: 30px; margin-left: 100px;"></div>
iii. 8 - 5 <div style="border: 1px solid black; width: 150px; height: 30px; margin-left: 100px;"></div>	iv. 6 - 4 <div style="border: 1px solid black; width: 150px; height: 30px; margin-left: 100px;"></div>
v. 2 - 1 <div style="border: 1px solid black; width: 150px; height: 30px; margin-left: 100px;"></div>	vi. 7 - 2 <div style="border: 1px solid black; width: 150px; height: 30px; margin-left: 100px;"></div>

Q10. Solve the following word problem (Addition & Subtraction):

i. John had 16 blue pencils and 3 red pencils.

How many pencils did have altogether?

	Tens	Ones
+		

ii. There were 15 apples in a shop. 3 apples sold.

How many were left now?

	Tens	Ones
-		

iii. A farmer planted 5 roses plant and 2 sunflowers plant.

How many flowers did he plant in all ?

	Tens	Ones
+		

iv. There are 18 parrots sitting on the tree, among them 5 parrot flew away. Now how many parrots were sitting on the tree ?

	Tens	Ones
-		

v. There are 13 boys and 5 girls in a classroom. How many children are there altogether in classroom?

	Tens	Ones
+		