



SHREE VASISHTHA VIDHYALAYA

Social Studies Worksheet 2026-2027

Name: _____

Std: III - _____

Roll No. _____

Worksheet No: - PA1-01

Date: - _____

Ch - 1 - The Earth - Our home.

Section A: - Conceptual Understanding

Q-1 Tick (✓) the correct answer.

1) Which planet in our solar system is known for having rings?

- a) Earth b) Saturn c) Venus d) Jupiter

2) The Earth is the _____ planet from the sun.

- a) first b) second c) third d) fourth

3) Who proved that the Earth is round by sailing across it.

- a) Galileo Galilei b) Ferdinand Magellan c) Isaac Newton d) Christopher Columbus

4) The _____ is the center of the solar system.

- a) moon b) planet c) sun d) star

5) What covers most of the earth?

- a) land b) water c) sand d) mountains

6) What do we call the air around earth?

- a) ocean b) land c) atmosphere d) rain

Q-2 Fill in the blanks with the help of the given bracket.

[satellite , Asteroid , earth , Aryabhata , coast , planet]

1) Planet is a body that revolves around the sun.

2) A natural object such as a moon that moves around a planet is called satellite.

3) Aryabhata was an artificial satellite launched by India in 1975.

4) Asteroid is a large rock that moves around the sun.

5) We live on planet Earth.

6) The place where land and sea meet is called Coast.

Q-3 Write 'T' for true and 'F' for false statement.

1) Mercury is the smallest planet in the solar system.

T

2) The Earth is also known as red planet.

F

3) Only 10% of the earth is covered with water.

F

4) The Horizon is a place where land and sky seem to meet.

T

5) Astronauts are people who travel in space.

T

Answer in one word.

- 1) I am the sixth planet from the sun and I have rings Saturn
- 2) An area of high flat land. Plateau

Q-5 Define.

- 1) Sailor - A person who sails on a ship.
- 2) Solar system - The sun and eight planets together make the solar system.


Q-6 Rearrange the jumbled word.

- 1) ERSEVINU - UNIVERSE
- 2) HTRAE - EARTH
- 3) EREPHSMOTA - ATMOSPHERE
- 4) TENALP - PLANET


Section B: - Map and Activity.

Q-1 Identify the picture and write their names.

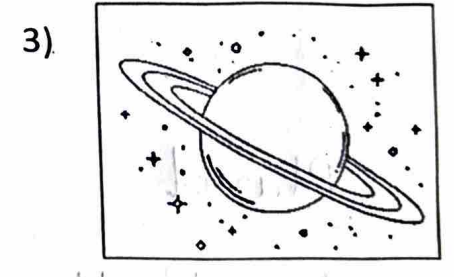
[Ferdinand Magellan , Solar system , Milky way , Saturn , Horizon]



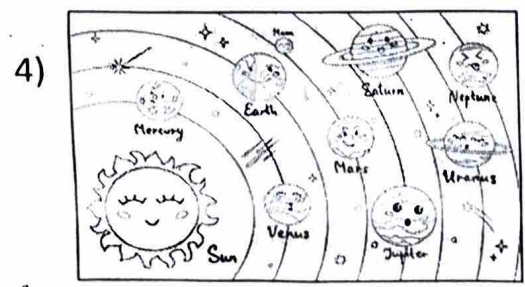
Ferdinand Magellan




Milky Way



Saturn



Solar system



Horizon

Q-1
23/4