



SHREE VASISHTHA VIDHYALAYA

Science Worksheet 2026-2027

Name: _____

Std: III - _____

Roll No. _____

Worksheet No: - PA1-01

Date: - _____

Ch. 1 - Living and non – living things.

Q-1 Tick (✓) the correct answer.

1) Which of the following lays eggs?

a) elephant

b) pig

c) parrot

2) Fishes swim with the help of

a) fins

b) legs

c) wings

3) An insect breathes through

a) stomata

b) spiracles

c) lungs

4) Which of these does not grow?

a) seed

b) kitten

c) doll

5) Why do living things need food?

a) to grow

b) to move

c) both

Q-2 Circle the odd one out.

1) cat dog fish chair

2) book plant chair table

3) cockroach butterfly mosquito stomata

4) air water sunlight insects

5) pigeon snake cow lizard

Q-3 Complete the following.

1) A  grows and changes to become a _____.

2) A  grows and changes into a _____.

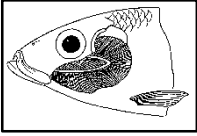
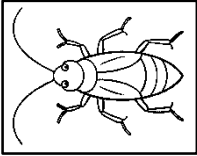
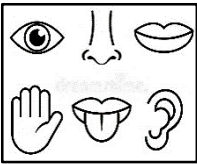


3) A  grows and changes into a _____.

4) A  grows and changes into a _____.

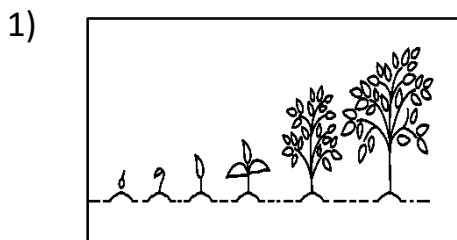
Q-4 Fill in the blanks.

- 1) A bird moves with the help of _____.
- 2) Leaves of the _____ plant close when touched.
- 3) Plants breathe through tiny holes in their _____.
- 4) _____ prepare their own food.


Q-5 Match the following.

- | | | |
|--|-----------------|--------------|
| 1)  | a. feelers | Ans: 1 _____ |
| 2)  | b. gills | Ans: 2 _____ |
| 3)  | c. non – living | Ans: 3 _____ |
| 4)  | d. sense organs | Ans: 4 _____ |
| 5)  | e. kitten | Ans: 5 _____ |


Q-6 Observe the image and circle the correct option to match the correct feature.



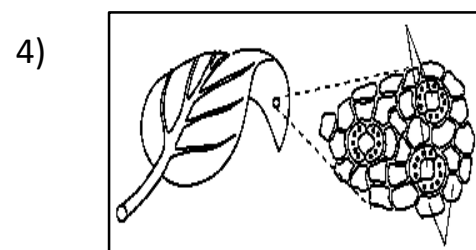
Living things breathe / grow



Living things grow / reproduce




Living things move / fly



Living things breathe / move

Q-7 Draw one non – living thing found in your classroom in the given space and colour it.



Q-7 Draw one non – living thing found in your classroom in the given space and colour it.

