



SHREE VASISHTHA VIDHYALAYA

Maths Worksheet 2026-27

Name: _____

Std. I - _____

Roll No. _____

Worksheet No: - PA1-01

Date: - _____

L-1 Looking Back

Conceptual understanding

Q-1 Add the given number.

$$\begin{array}{r} 1) \quad 5 \\ + \quad 2 \\ \hline \end{array}$$

$$\begin{array}{r} 2) \quad 3 \\ + \quad 1 \\ \hline \end{array}$$

$$\begin{array}{r} 3) \quad 7 \\ + \quad 2 \\ \hline \end{array}$$

Q-2 Fill in the blanks.

- 1) 19 is between _____ and _____
- 2) 8 minus 3 is equal to _____
- 3) 6 plus 2 is _____
- 4) The number just after 49 is _____
- 5) 73 is before _____
- 6) The sign of addition is _____
- 7) The sign of subtraction is _____

Q-3 Subtract the given number.

$$\begin{array}{r} 1) \quad 6 \\ - \quad 2 \\ \hline \end{array}$$

$$\begin{array}{r} 2) \quad 3 \\ - \quad 3 \\ \hline \end{array}$$

$$\begin{array}{r} 3) \quad 8 \\ - \quad 4 \\ \hline \end{array}$$

Q-4 Match the ordinal numbers with its name:

A

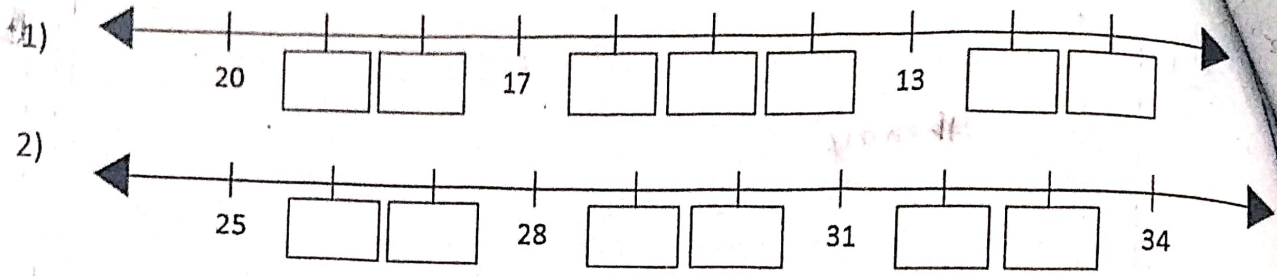
B

Ans.

- | | | |
|--------------------|------------|----------|
| 1) 7 th | a) fifth | 1- _____ |
| 2) 9 th | b) second | 2- _____ |
| 3) 6 th | c) seventh | 3- _____ |
| 4) 2 nd | d) nineth | 4- _____ |
| 5) 5 th | e) sixth | 5- _____ |



Q-5 Write the missing number using number line.



Mental Ability

Q-1 Put the correct sign. [$>$, $<$ OR $=$]

1) 46 64

2) 17 17

3) 96 24

4) 49 94

Q-2 Complete the following facts.

1) $=$ $-$ $=$

2) $=$ $+$ $=$

3) $=$ $+$ $=$

4) $=$ $-$ $=$

Q-3 Tick (\checkmark) the fifth and cross (\times) the third ice-cream.



Q-4 Add by drawing lines.

1)
$$\begin{array}{r} 3 \\ + 5 \\ \hline \end{array}$$

2)
$$\begin{array}{r} 4 \\ + 3 \\ \hline \end{array}$$

Q-5 World problem.

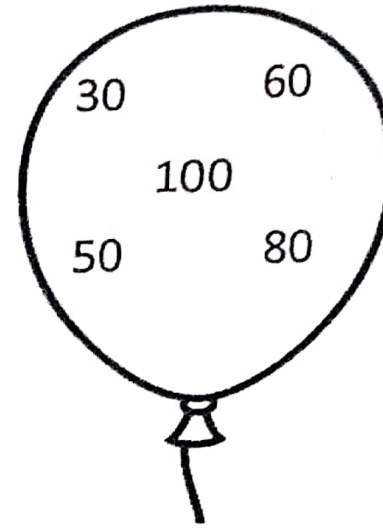
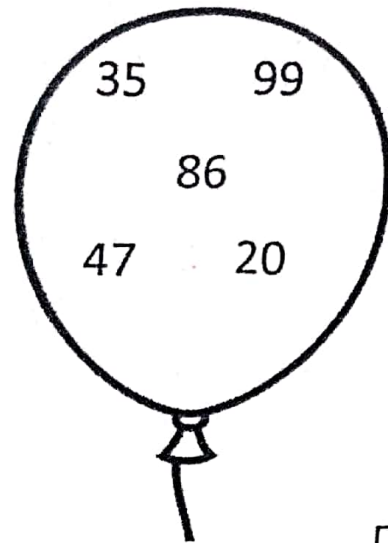
1) There are pencils and eraser. How many things are there altogether.

Ans. $+$ $=$

2) There are balloons flew away. How many balloons are left now?

Ans.

Q-6 Encircle (○) the greatest number and cross (×) the smallest number.



Tables

1) 0 × 1 =

2) 1 × 6 =

3) 0 × 3 =

4) 2 × 6 =

5) 2 × 8 =

6) 1 × 10 =

7) 2 × 7 =

8) 0 × 5 =

9) 1 × 7 =

10) 2 × 5 =



SHREE VASISHTHA VIDHYALAYA

Maths Worksheet 2026-27

Name: ANSWER KEY

Std. I - _____

Roll No. _____

Worksheet No: - PA1-01

Date: - _____

L-1 Looking Back

Conceptual understanding

Q-1 Add the given number.

$$\begin{array}{r} 1) \quad 5 \\ + \quad 2 \\ \hline \boxed{7} \end{array}$$

$$\begin{array}{r} 2) \quad 3 \\ + \quad 1 \\ \hline \boxed{4} \end{array}$$

$$\begin{array}{r} 3) \quad 7 \\ + \quad 2 \\ \hline \boxed{9} \end{array}$$

Q-2 Fill in the blanks.

- 1) 19 is between 18 and 20
- 2) 8 minus 3 is equal to 8 - 3 = 5
- 3) 6 plus 2 is 6 + 2 = 8
- 4) The number just after 49 is 50
- 5) 73 is before 74
- 6) The sign of addition is +
- 7) The sign of subtraction is -

Q-3 Subtract the given number.

$$\begin{array}{r} 1) \quad 6 \\ - \quad 2 \\ \hline \boxed{4} \end{array}$$

$$\begin{array}{r} 2) \quad 3 \\ - \quad 3 \\ \hline \boxed{0} \end{array}$$

$$\begin{array}{r} 3) \quad 8 \\ - \quad 4 \\ \hline \boxed{4} \end{array}$$

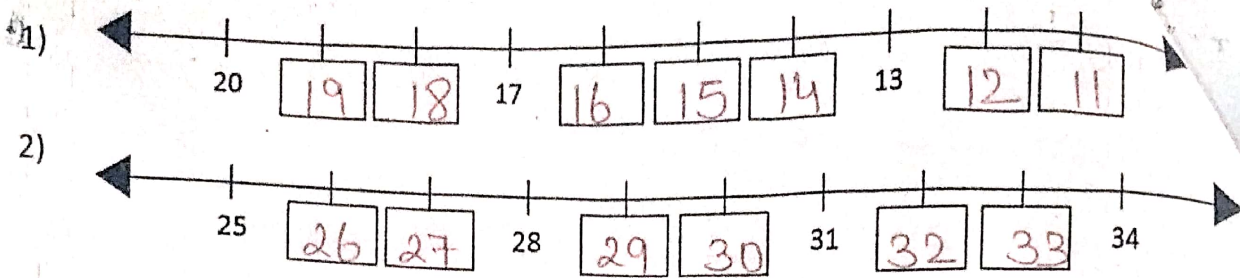
Q-4 Match the ordinal numbers with its name:

- A**
- 1) 7th
 - 2) 9th
 - 3) 6th
 - 4) 2nd
 - 5) 5th

- B**
- a) fifth
 - b) second
 - c) seventh
 - d) ninth
 - e) sixth

- Ans.**
- 1- C
 - 2- D
 - 3- E
 - 4- B
 - 5- A

Q-5 Write the missing number using number line.



Mental Ability

Q-1 Put the correct sign. [$>$, $<$ OR $=$]

1) $46 < 64$

2) $17 = 17$

3) $96 > 24$

4) $49 < 94$

Q-2 Complete the following facts.

1) $= 7 - 3 = 4$

2) $= 5 + 3 = 8$

3) $= 3 + 2 = 5$

4) $= 8 - 5 = 3$

Q-3 Tick (\checkmark) the fifth and cross (\times) the third ice-cream.



Q-4 Add by drawing lines.

1)
$$\begin{array}{r} 3 \\ + 5 \\ \hline 8 \end{array}$$

2)
$$\begin{array}{r} 4 \\ + 3 \\ \hline 7 \end{array}$$

Q-5 World problem.

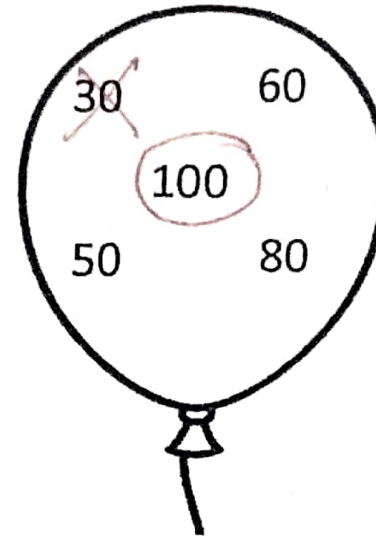
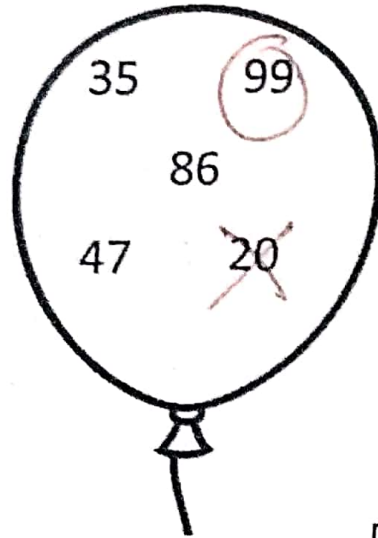
1) There are pencils and eraser. How many things are there altogether.

Ans. $5 + 3 = 8$

2) There are balloons flew away. How many balloons are left now?

Ans. $7 - 4 = 3$

Q-6 Encircle (○) the greatest number and cross (×) the smallest number.



Tables

- | | | | | | | | | | | | |
|----|---|---|---|---|---------------------------------|-----|---|---|----|---|---------------------------------|
| 1) | 0 | × | 1 | = | <input type="text" value="0"/> | 6) | 1 | × | 10 | = | <input type="text" value="10"/> |
| 2) | 1 | × | 6 | = | <input type="text" value="6"/> | 7) | 2 | × | 7 | = | <input type="text" value="14"/> |
| 3) | 0 | × | 3 | = | <input type="text" value="0"/> | 8) | 0 | × | 5 | = | <input type="text" value="0"/> |
| 4) | 2 | × | 6 | = | <input type="text" value="12"/> | 9) | 1 | × | 7 | = | <input type="text" value="7"/> |
| 5) | 2 | × | 8 | = | <input type="text" value="16"/> | 10) | 2 | × | 5 | = | <input type="text" value="10"/> |