

**VASISHTHA GENESIS SCHOOL, BARDOLI**  
**(Academic Session: 2026-27)**

**Date:** \_\_\_\_\_ **Class: 5** **Div: A / B / C/D** **Roll No:** \_\_\_\_\_ **Sub: S.S**  
**Name:** \_\_\_\_\_ **Worksheet: PT-1(rev of ch 1,6&10)**

**Q1. Fill in the blanks:**

- i. Around 2,500 years ago the Greek mathematician \_\_\_\_\_PYTHAGORAS\_\_\_\_\_, suggested that the earth is round.
- ii. \_\_\_\_\_FERDINAND MAGELLAN\_\_\_\_\_ was the Portuguese explorer, who travelled for 3 years from Spain and proved that the Earth is round.
- iii. A \_\_GLOBE\_\_\_\_\_ is the spherical model of the Earth.
- iv. The shape of the Earth is \_\_OBLATE SPHERIOD\_\_\_\_\_
- v. The Earth rotates on an Imaginary tilted line called \_\_\_\_AXIS\_\_\_\_\_
- vi. An imaginary line that divides the globe into two equal halves is called the \_\_EQUATOR\_\_\_\_\_
- vii. There are total \_\_181\_\_\_\_\_ parallels of latitudes.
- viii. The points at which latitudes and longitudes criss-cross each other are called \_\_\_\_\_COORDINATES\_\_\_\_\_
- ix. Small patches of land in desert having water in the form of a lake or pond are called \_\_\_\_DESERT\_\_\_\_\_
- x. \_\_\_\_\_BAOBAB\_\_\_\_\_ tree is known as bottle tree.
- xi. \_\_\_\_CAMEL\_\_\_\_\_ is known as the ship of the desert.
- xii. The capital of Saudi Arabia is \_\_\_\_RIYADH\_\_\_\_\_
- xiii. India is often called a \_\_\_\_\_LAND OF WONDERS\_\_\_\_\_
- xiv. \_\_\_\_\_DIALECT\_\_\_\_\_ is a form of a language that is spoken in a particular area.
- xv. The \_\_\_\_\_NARENDRA MODI STADIUM\_\_\_\_\_ in Gujarat is the world's largest cricket stadium.
- xvi. Write the full form of UPI \_\_\_\_\_UNIFIED PAYEMENT INTERFACE\_\_\_\_\_

**Q2. State whether the following statements are 'True' or 'False'.**

- i. The equator is a semicircle. \_\_\_\_\_F\_\_\_\_\_




- ii. The distance between two longitudes is maximum at the equator. \_\_T\_\_
- iii. There is very little or no rainfall in desert regions. \_\_T\_\_
- iv. India is the world's largest democracy. \_T\_\_

Column 'A'	Ans	Coumn'B'
i. Antarctic circle	i. B	a) Tamil Nadu
ii. idli	ii. A	b) 66 1/2's
iii. Devanagari script	iii. D	c) Bottle tree
iv. Baobab tree	iv. C	d) Hindi

Q4. Choose the correct option and answer the following question:

- i. Indian currency notes display denomination in \_\_\_\_\_ languages.  
 (a) 15                      (b) 16                      (c) 17                      (d) 12
- ii. The amount of rainfall in a desert is usually less than \_\_\_\_\_ annually.  
 (a) 15cm                      (b) 25 cm                      (c) 12cm                      (d) 10 cm
- iii. The parallels are drawn at a distance of \_\_\_\_\_ degree from each other.  
 (a) 1                      (b) 2                      (c) 3                      (d) 4

Q5. Identify the following pictures:

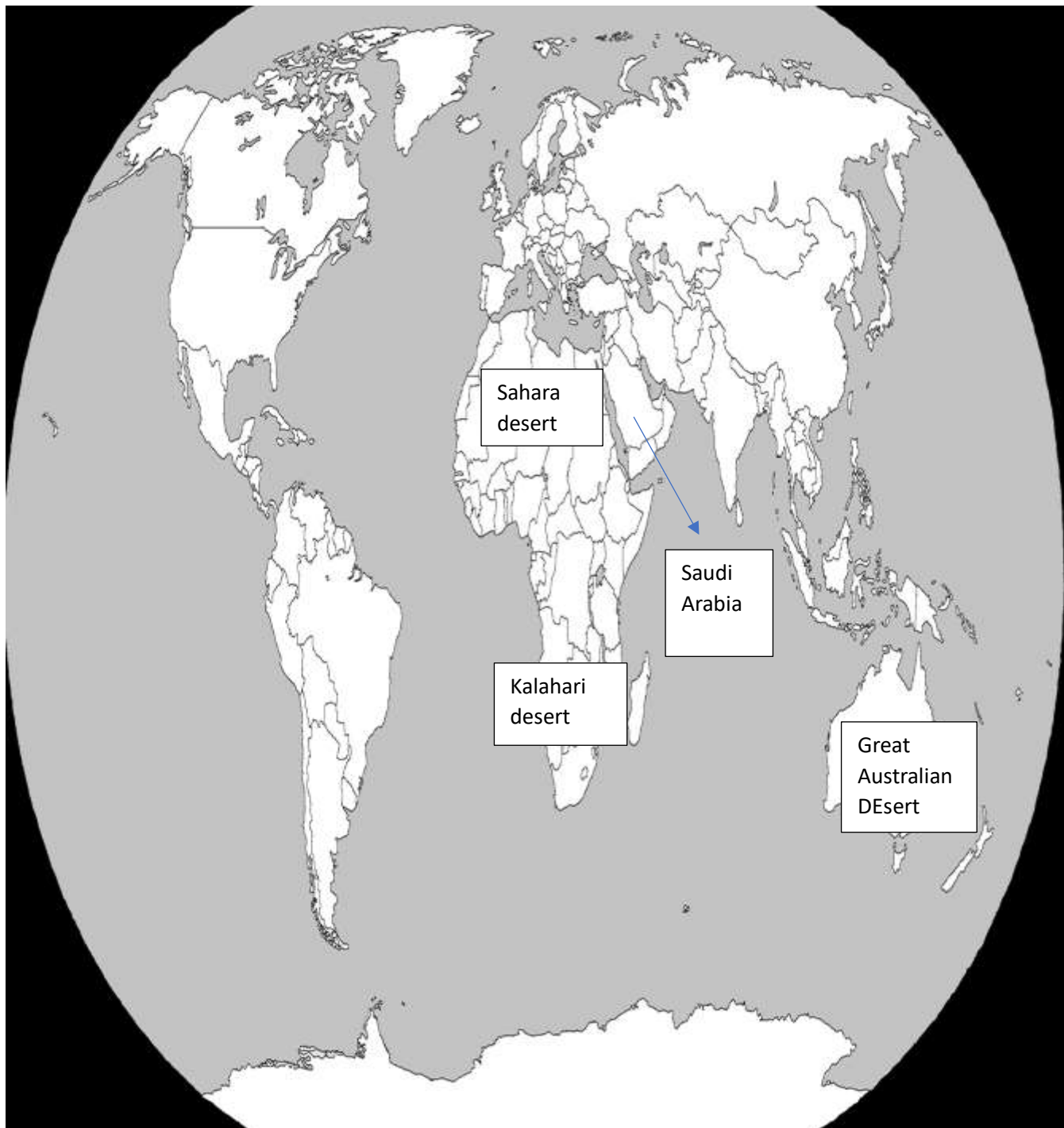
		
i. SARDAR VALLABHAI PATEL	ii. GLOBE	iii. KANGAROO RAT

**Q4. Locate the following in the Indian political map:**



- i. The state where Gonds tribe is situated.**
- ii. The state where Kanjivaram silk is famous for.**
- iii. The state where Bandhani saree is famous for**
- iv. The state where dhokla is famous for**
- v. The state where idlis and dosas are common.**

**Q5. Locate the following in the world political map:**



- i. The Sahara Desert
- ii. The Kalahari Desert
- iii. The Great Australian Desert
- iv. The Saudi Arabia