

VASISHTHA GENESIS SCHOOL, BARDOLI
(Academic Session: 2026-27)

Date: _____ **Class:** 5 **Div:** A / B / C/D **Roll No:** _____ **Sub:** S.S
Name: _____ **Worksheet:** PT-1(rev of ch 1,6&10)

Q1. Fill in the blanks:

- i. Around 2,500 years ago the Greek mathematician _____, suggested that the earth is round.
- ii. _____ was the Portuguese explorer, who travelled for 3 years from Spain and proved that the Earth is round.
- iii. A _____ is the spherical model of the Earth.
- iv. The shape of the Earth is _____
- v. The Earth rotates on an Imaginary tilted line called _____
- vi. An imaginary line that divides the globe into two equal halves is called the _____
- vii. There are total _____ parallels of latitudes.
- viii. The points at which latitudes and longitudes criss-cross each other are called _____
- ix. Small patches of land in desert having water in the form of a lake or pond are called _____
- x. _____ tree is known as bottle tree.
- xi. _____ is known as the ship of the desert.
- xii. The capital of Saudi Arabia is _____
- xiii. India is often called a _____
- xiv. _____ is a form of a language that is spoken in a particular area.
- xv. The _____ in Gujarat is the world's largest cricket stadium.
- xvi. Write the full form of UPI _____

Q2. State whether the following statements are 'True' or 'False'.

- i. The equator is a semicircle. _____
- ii. The distance between two longitudes is maximum at the equator. _____
- iii. There is very little or no rainfall in desert regions. _____




iv. India is the world's largest democracy. _____

Column 'A'	Ans	Column 'B'
i. Antarctic circle	i.	a) Tamil Nadu
ii. idli	ii.	b) 66 1/2's
iii. Devanagari script	iii.	c) Bottle tree
iv. Baobab tree	iv.	d) Hindi

Q4. Choose the correct option and answer the following question:

- i. Indian currency notes display denomination in _____ languages.
(a) 15 (b) 16 (c) 17 (d) 12
- ii. The amount of rainfall in a desert is usually less than _____ annually.
(a) 15cm (b) 25 cm (c) 12cm (d) 10 cm
- iii. The parallels are drawn at a distance of _____ degree from each other.
(a) 1 (b) 2 (c) 3 (d) 4

Q5. Identify the following pictures:

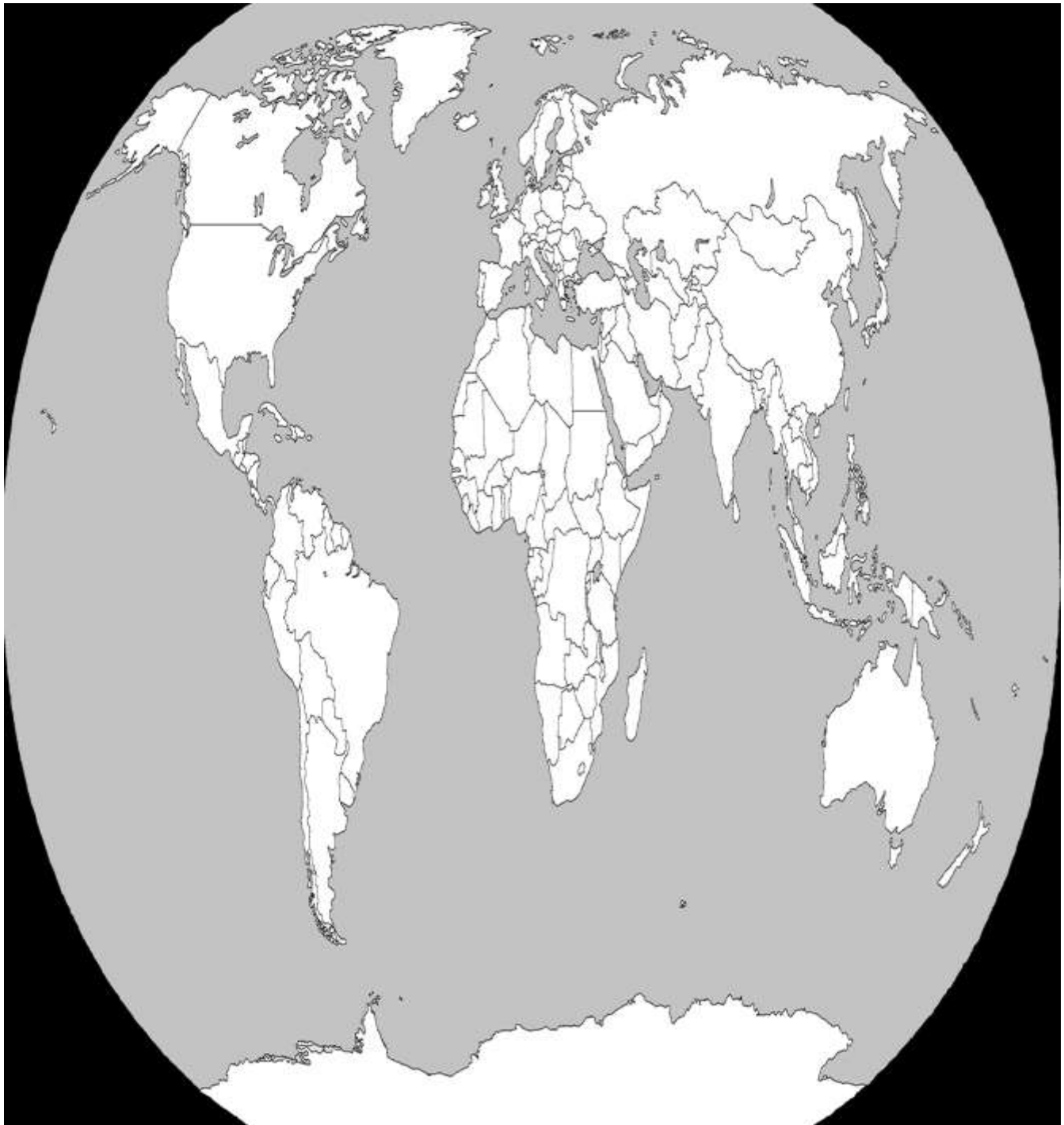
		
i.	ii.	iii.

Q4. Locate the following in the Indian political map:



- i. The state where Gonds tribe is situated.**
- ii. The state where Kanjivaram silk is famous for.**
- iii. The state where Bandhani saree is famous for**
- iv. The state where dhokla is famous for**
- v. The state where idlis and dosas are common.**

Q5. Locate the following in the world political map:



- i. The Sahara Desert
- ii. The Kalahari Desert
- iii. The Great Australian Desert
- iv. The Saudi Arabia